

Name: \_\_\_\_\_

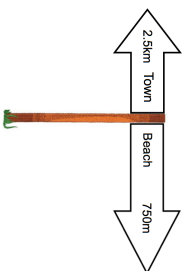
5-a-day

Foundation

23rd January




Work out  $0.3 \times 0.7$



Work out the distance between the town and the beach.

State your units.

The same type of dinner plate is sold in two different packs.



Which is better value for money?

Share \$40 in the ratio 2:3

**Factorise  $15y + 20$**

Name: \_\_\_\_\_

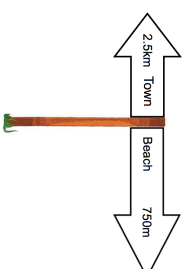
5-a-day

Foundation

23rd January




Work out  $0.3 \times 0.7$



Work out the distance between the town and the beach.

State your units.

The same type of dinner plate is sold in two different packs.



Which is better value for money?

Share \$40 in the ratio 2:3

**Factorise  $15y + 20$**