
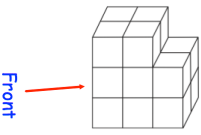


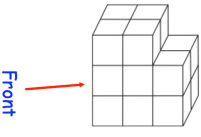



<b>25th January</b>		 Corbettmaths						
Max earns £220 per week. He is given an increase of 10%. What is his new salary?								
<b>French</b> <b>German</b> <table border="1" style="margin-left: auto; margin-right: auto;"> <tr> <td><b>Male</b></td> <td style="color: red;">14</td> <td></td> </tr> <tr> <td><b>Female</b></td> <td></td> <td style="color: red;">8</td> </tr> </table>	<b>Male</b>	14		<b>Female</b>		8	There are twice as many boys studying French than girls. The total number of students is 50. Find the missing numbers.	
<b>Male</b>	14							
<b>Female</b>		8						
If $15 \times 34 = 510$ Use that information to work out: $150 \times 34$	$30 \times 34$ $1.5 \times 34$							
	Draw the front elevation. 							
Simplify $7w - 2w$	Simplify $7h + 5k + h - 3k$							

<b>25th January</b>		 Corbettmaths						
Max earns £220 per week. He is given an increase of 10%. What is his new salary?								
<b>French</b> <b>German</b> <table border="1" style="margin-left: auto; margin-right: auto;"> <tr> <td><b>Male</b></td> <td style="color: red;">14</td> <td></td> </tr> <tr> <td><b>Female</b></td> <td></td> <td style="color: red;">8</td> </tr> </table>	<b>Male</b>	14		<b>Female</b>		8	There are twice as many boys studying French than girls. The total number of students is 50. Find the missing numbers.	
<b>Male</b>	14							
<b>Female</b>		8						
If $15 \times 34 = 510$ Use that information to work out: $150 \times 34$	$30 \times 34$ $1.5 \times 34$							
	Draw the front elevation. 							
Simplify $7w - 2w$	Simplify $7h + 5k + h - 3k$							