
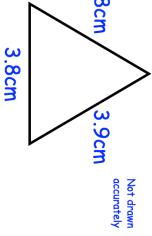
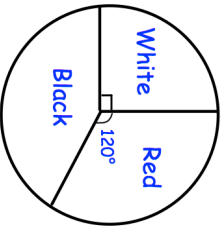

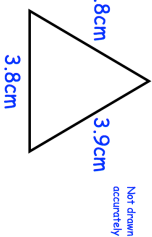
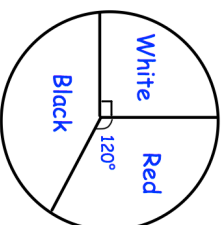


<b>27th January</b>	 Corbettmaths																				
2 4 3 4 8 1 14 What is the median?	What is the mode?																				
Anna has a mobile phone. Text messages cost 3p each. Calls cost 5p per minute. She also has to pay £10 each month.	In September, Anna: - made 100 minutes of calls - sent 70 text messages. How much was her bill in September?																				
In the grid, each row adds up to the number to the right. Find the values of w, x, y and z.	<table border="1" data-bbox="742 660 901 896"> <tr><td>w</td><td>w</td><td>w</td><td>w</td><td>20</td></tr> <tr><td>w</td><td>w</td><td>x</td><td>x</td><td>24</td></tr> <tr><td>w</td><td>x</td><td>x</td><td>y</td><td>25</td></tr> <tr><td>w</td><td>x</td><td>y</td><td>z</td><td>30</td></tr> </table>	w	w	w	w	20	w	w	x	x	24	w	x	x	y	25	w	x	y	z	30
w	w	w	w	20																	
w	w	x	x	24																	
w	x	x	y	25																	
w	x	y	z	30																	
	Write down the type of triangle shown. Work out the perimeter of the triangle.																				
	The pie chart shows the colours of counters in a bag. There are 48 counters in total. How many are red?																				

<b>27th January</b>	 Corbettmaths																				
2 4 3 4 8 1 14 What is the median?	What is the mode?																				
Anna has a mobile phone. Text messages cost 3p each. Calls cost 5p per minute. She also has to pay £10 each month.	In September, Anna: - made 100 minutes of calls - sent 70 text messages. How much was her bill in September?																				
In the grid, each row adds up to the number to the right. Find the values of w, x, y and z.	<table border="1" data-bbox="742 1749 901 1984"> <tr><td>w</td><td>w</td><td>w</td><td>w</td><td>20</td></tr> <tr><td>w</td><td>w</td><td>x</td><td>x</td><td>24</td></tr> <tr><td>w</td><td>x</td><td>x</td><td>y</td><td>25</td></tr> <tr><td>w</td><td>x</td><td>y</td><td>z</td><td>30</td></tr> </table>	w	w	w	w	20	w	w	x	x	24	w	x	x	y	25	w	x	y	z	30
w	w	w	w	20																	
w	w	x	x	24																	
w	x	x	y	25																	
w	x	y	z	30																	
	Write down the type of triangle shown. Work out the perimeter of the triangle.																				
	The pie chart shows the colours of counters in a bag. There are 48 counters in total. How many are red?																				