
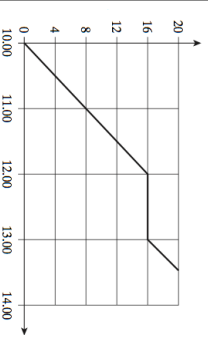


Name: \_\_\_\_\_

5-a-day


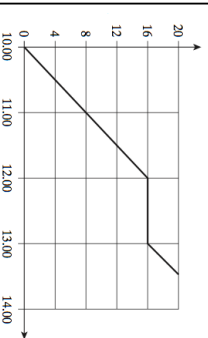
Foundation

<b>5th January</b>	Corbettmaths 
<p>Each member of a club is going to receive a badge. There are 140 members. The badges are sold in packs of 9.</p> <p>Work out the least number of packs of badges that need to be bought.</p>	
$\frac{2}{7} \times \frac{1}{3}$	$\frac{4}{7} \div \frac{4}{5}$
<p>Work out</p> $124$	
	<p>The graph shows the distance (in miles) from home at each time. How far was Nicky from home at 11:30?</p>
<p>What happened between 12:00 and 13:00</p>	<p>Work out the speed between 10:00 and 12:00</p>

Name: \_\_\_\_\_

5-a-day

Foundation

<b>5th January</b>	Corbettmaths 
<p>Each member of a club is going to receive a badge. There are 140 members. The badges are sold in packs of 9.</p> <p>Work out the least number of packs of badges that need to be bought.</p>	
$\frac{2}{7} \times \frac{1}{3}$	$\frac{4}{7} \div \frac{4}{5}$
<p>Work out</p> $124$	
	<p>The graph shows the distance (in miles) from home at each time. How far was Nicky from home at 11:30?</p>
<p>What happened between 12:00 and 13:00</p>	<p>Work out the speed between 10:00 and 12:00</p>