
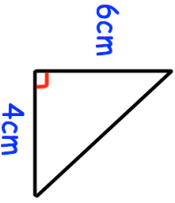


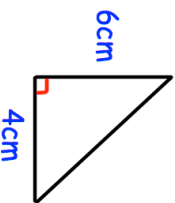


1st January	Corbettmaths 												
Solve the inequality $3x + 4 \leq 22$													
A car decreases in value 10% a year. If it was bought for £5000, how much will it be worth after 2 years?													
	Calculate the length of the missing side												
The table shows information about how long it takes students to get to school.  Work out an estimate for the mean	<table border="1" data-bbox="470 577 651 853"> <thead> <tr> <th>Time (minutes)</th> <th>Frequency</th> </tr> </thead> <tbody> <tr> <td><math>0 &lt; t \leq 10</math></td> <td>2</td> </tr> <tr> <td><math>10 &lt; t \leq 20</math></td> <td>8</td> </tr> <tr> <td><math>20 &lt; t \leq 30</math></td> <td>12</td> </tr> <tr> <td><math>30 &lt; t \leq 40</math></td> <td>7</td> </tr> <tr> <td><math>40 &lt; t \leq 50</math></td> <td>1</td> </tr> </tbody> </table>	Time (minutes)	Frequency	$0 < t \leq 10$	2	$10 < t \leq 20$	8	$20 < t \leq 30$	12	$30 < t \leq 40$	7	$40 < t \leq 50$	1
Time (minutes)	Frequency												
$0 < t \leq 10$	2												
$10 < t \leq 20$	8												
$20 < t \leq 30$	12												
$30 < t \leq 40$	7												
$40 < t \leq 50$	1												
David buys 2 DVDs and 2 CDs in a shop and in total they cost £18. Ellie buys 3 DVDs and 2 CDs in the same shop and they cost £22.  Form two equations and solve to find the cost of each DVD and each CD. 													

1st January	Corbettmaths 												
Solve the inequality $3x + 4 \leq 22$													
A car decreases in value 10% a year. If it was bought for £5000, how much will it be worth after 2 years?													
	Calculate the length of the missing side												
The table shows information about how long it takes students to get to school.  Work out an estimate for the mean	<table border="1" data-bbox="470 1666 651 1942"> <thead> <tr> <th>Time (minutes)</th> <th>Frequency</th> </tr> </thead> <tbody> <tr> <td><math>0 &lt; t \leq 10</math></td> <td>2</td> </tr> <tr> <td><math>10 &lt; t \leq 20</math></td> <td>8</td> </tr> <tr> <td><math>20 &lt; t \leq 30</math></td> <td>12</td> </tr> <tr> <td><math>30 &lt; t \leq 40</math></td> <td>7</td> </tr> <tr> <td><math>40 &lt; t \leq 50</math></td> <td>1</td> </tr> </tbody> </table>	Time (minutes)	Frequency	$0 < t \leq 10$	2	$10 < t \leq 20$	8	$20 < t \leq 30$	12	$30 < t \leq 40$	7	$40 < t \leq 50$	1
Time (minutes)	Frequency												
$0 < t \leq 10$	2												
$10 < t \leq 20$	8												
$20 < t \leq 30$	12												
$30 < t \leq 40$	7												
$40 < t \leq 50$	1												
David buys 2 DVDs and 2 CDs in a shop and in total they cost £18. Ellie buys 3 DVDs and 2 CDs in the same shop and they cost £22.  Form two equations and solve to find the cost of each DVD and each CD. 