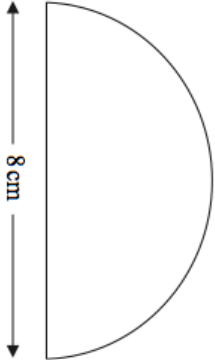
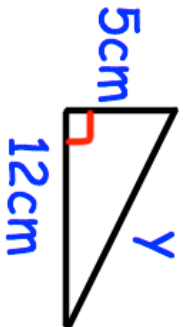
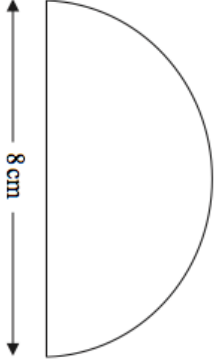
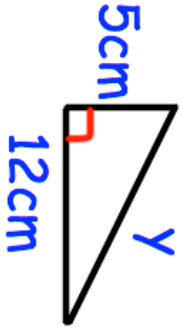


12th January		Corbettmaths													
<table border="1"> <thead> <tr> <th></th> <th>French</th> <th>German</th> </tr> </thead> <tbody> <tr> <th>Male</th> <td>14</td> <td>6</td> </tr> <tr> <th>Female</th> <td>12</td> <td>8</td> </tr> </tbody> </table>		French	German	Male	14	6	Female	12	8	<p>A student is selected at random.</p> <p>What is probability of the student studying German?</p>					
	French	German													
Male	14	6													
Female	12	8													
	Calculate the area														
	Find y														
<p>Complete this table for the graph</p> $y = x^2 + 1$	<table border="1"> <thead> <tr> <th>x</th> <th>-2</th> <th>-1</th> <th>0</th> <th>1</th> <th>2</th> </tr> </thead> <tbody> <tr> <th>y</th> <td></td> <td></td> <td></td> <td></td> <td></td> </tr> </tbody> </table>	x	-2	-1	0	1	2	y							
x	-2	-1	0	1	2										
y															
$a = \begin{pmatrix} 2 \\ -1 \end{pmatrix}$ $b = \begin{pmatrix} 5 \\ 3 \end{pmatrix}$	Work out $2a + b$ as a column vector														

12th January		Corbettmaths													
<table border="1"> <thead> <tr> <th></th> <th>French</th> <th>German</th> </tr> </thead> <tbody> <tr> <th>Male</th> <td>14</td> <td>6</td> </tr> <tr> <th>Female</th> <td>12</td> <td>8</td> </tr> </tbody> </table>		French	German	Male	14	6	Female	12	8	<p>A student is selected at random.</p> <p>What is probability of the student studying German?</p>					
	French	German													
Male	14	6													
Female	12	8													
	Calculate the area														
	Find y														
<p>Complete this table for the graph</p> $y = x^2 + 1$	<table border="1"> <thead> <tr> <th>x</th> <th>-2</th> <th>-1</th> <th>0</th> <th>1</th> <th>2</th> </tr> </thead> <tbody> <tr> <th>y</th> <td></td> <td></td> <td></td> <td></td> <td></td> </tr> </tbody> </table>	x	-2	-1	0	1	2	y							
x	-2	-1	0	1	2										
y															
$a = \begin{pmatrix} 2 \\ -1 \end{pmatrix}$ $b = \begin{pmatrix} 5 \\ 3 \end{pmatrix}$	Work out $2a + b$ as a column vector														