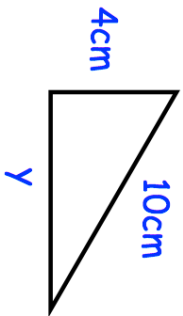
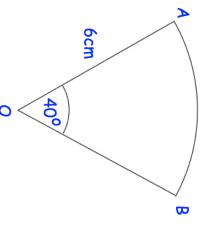
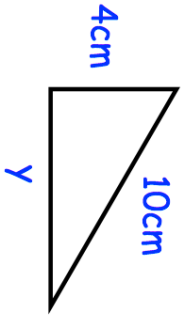
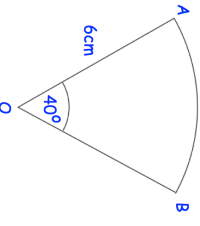


15th January		Corbettmaths
Simplify		
$5(x + 3) + 2x - 4$		
Work out		
$8\frac{1}{3} \div \frac{4}{7}$		
	Calculate the length of y for this right-angled triangle	
<p>There are red, green and blue beads in a bag.</p> <p>The ratio of red beads to green beads is 2:5</p> <p>The ratio of green beads to blue beads is 1:3</p> <p>Work out the ratio of red beads to blue beads</p>		
	Find the area of the sector. Give your answer in terms of $\pi$ .	

15th January		Corbettmaths
Simplify		
$5(x + 3) + 2x - 4$		
Work out		
$8\frac{1}{3} \div \frac{4}{7}$		
	Calculate the length of y for this right-angled triangle	
<p>There are red, green and blue beads in a bag.</p> <p>The ratio of red beads to green beads is 2:5</p> <p>The ratio of green beads to blue beads is 1:3</p> <p>Work out the ratio of red beads to blue beads</p>		
	Find the area of the sector. Give your answer in terms of $\pi$ .	