
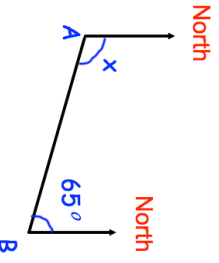
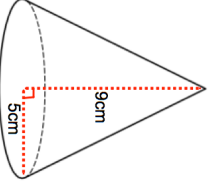

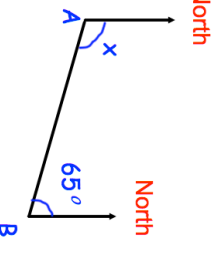


<b>18th January</b>		 Corbettmaths	
<p>If <math>2x + 4y = 18</math></p> <p>What is the value of <math>4x + 8y</math>?</p>	<p>What is the value of <math>x + 2y</math>?</p>		
<p>What is the bearing of A from B?</p>	<p>What is the bearing of B from A?</p>		
	<p>What is the size of angle <math>x</math>?</p>		
<p>The population of Northern Ireland is 1.8 million, to the nearest hundred thousand.</p> <p>What is the lowest possible number of people that live in Northern Ireland?</p>	<p>Work out the volume of the cone.</p>		
			

<b>18th January</b>		 Corbettmaths	
<p>If <math>2x + 4y = 18</math></p> <p>What is the value of <math>4x + 8y</math>?</p>	<p>What is the value of <math>x + 2y</math>?</p>		
<p>What is the bearing of A from B?</p>	<p>What is the bearing of B from A?</p>		
	<p>What is the size of angle <math>x</math>?</p>		
<p>The population of Northern Ireland is 1.8 million, to the nearest hundred thousand.</p> <p>What is the lowest possible number of people that live in Northern Ireland?</p>	<p>Work out the volume of the cone.</p>		
