
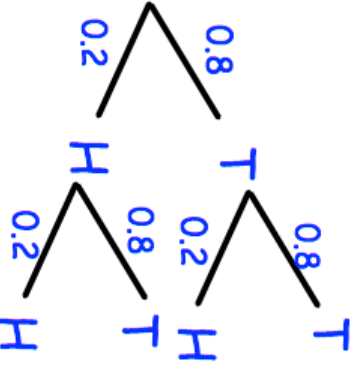

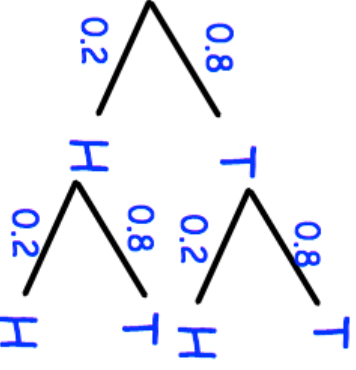


19th January		Corbettmaths 	
<p>A biased coin is flipped twice.</p> <p>Solve <math>x^2 - 2x - 15 = 0</math></p>			<p>Work out the probability of a tail and a tail.</p>
	<p>Work out the probability of at least one tail.</p>		
<p>Estimate <math>87.8 \times 2.1</math></p> <p>0.199</p>			
<p>5.62 has been truncated to two decimal places.</p> <p>Write down an inequality to show the range of possible actual values.</p>			

19th January		Corbettmaths 	
<p>A biased coin is flipped twice.</p> <p>Solve <math>x^2 - 2x - 15 = 0</math></p>			<p>Work out the probability of a tail and a tail.</p>
	<p>Work out the probability of at least one tail.</p>		
<p>Estimate <math>87.8 \times 2.1</math></p> <p>0.199</p>			
<p>5.62 has been truncated to two decimal places.</p> <p>Write down an inequality to show the range of possible actual values.</p>			