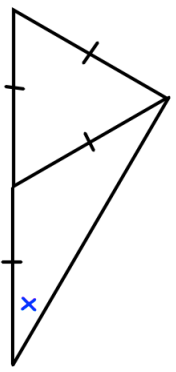
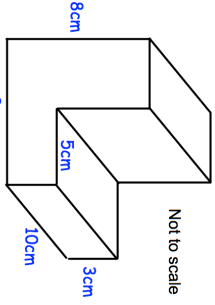


Name: _____

5-a-day

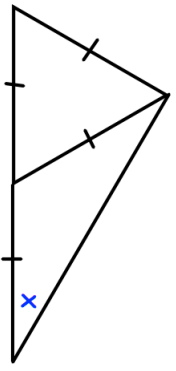
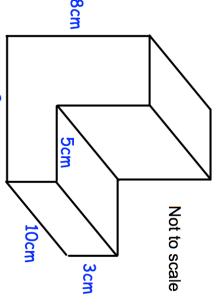
Foundation Plus

<p>24th January</p>  <p>Find x</p> <p>Corbettmaths</p>	
<p>Shown are four terms in a Fibonacci sequence</p> <p>1 1 2 3</p>	<p>Write down the next four terms</p>
<p>Write 2500 kg in grams.</p> <p>Give your answer in standard form.</p>	
<p>Charlene and Danielle share some money in ratio 2 : 3</p> <p>Danielle gets £25 more than Charlie.</p> <p>How much does each girl receive?</p>	
 <p>Not to scale</p> <p>Calculate the surface area</p>	

Name: _____

5-a-day

Foundation Plus

<p>24th January</p>  <p>Find x</p> <p>Corbettmaths</p>	
<p>Shown are four terms in a Fibonacci sequence</p> <p>1 1 2 3</p>	<p>Write down the next four terms</p>
<p>Write 2500 kg in grams.</p> <p>Give your answer in standard form.</p>	
<p>Charlene and Danielle share some money in ratio 2 : 3</p> <p>Danielle gets £25 more than Charlie.</p> <p>How much does each girl receive?</p>	
 <p>Not to scale</p> <p>Calculate the surface area</p>	