
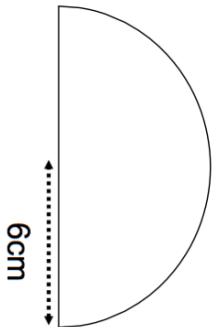
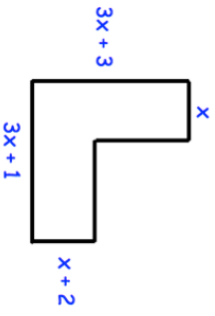
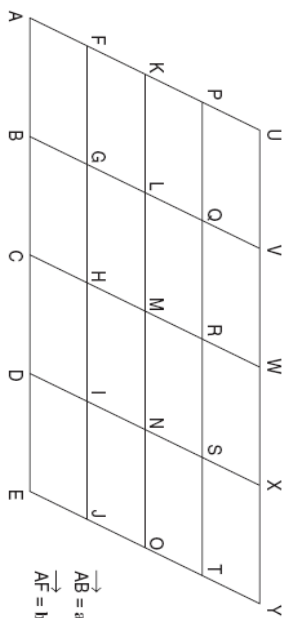

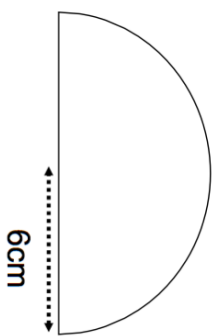
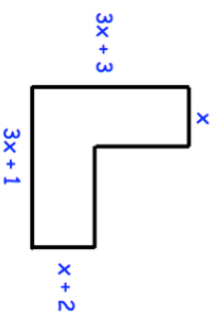
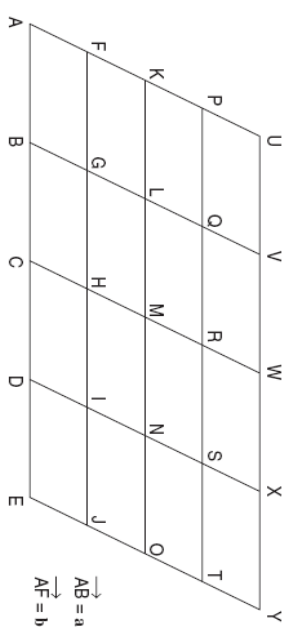


<b>26th January</b>	 Corbettmaths
<p>The angles in a triangle are in the ratio 1 : 2 : 9.</p> <p>What is the size of each angle?</p>	
	Find the perimeter
	Find an expression for the perimeter.
 <p><math>\vec{AB} = a</math> <math>\vec{AF} = b</math></p>	
Write a vector for $\vec{AH}$ in terms of $a$ and $b$	Write a vector for $\vec{DU}$ in terms of $a$ and $b$

<b>26th January</b>	 Corbettmaths
<p>The angles in a triangle are in the ratio 1 : 2 : 9.</p> <p>What is the size of each angle?</p>	
	Find the perimeter
	Find an expression for the perimeter.
 <p><math>\vec{AB} = a</math> <math>\vec{AF} = b</math></p>	
Write a vector for $\vec{AH}$ in terms of $a$ and $b$	Write a vector for $\vec{DU}$ in terms of $a$ and $b$