
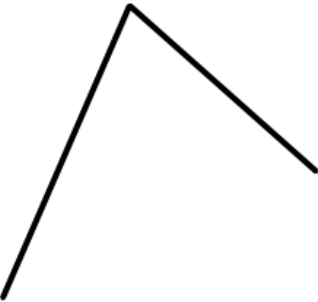
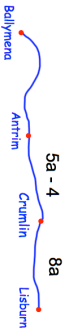
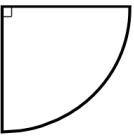

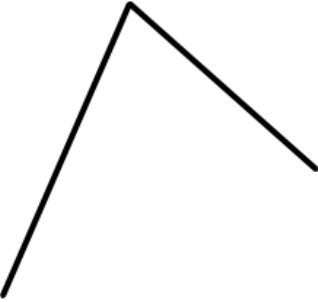
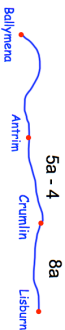


29th January  Corbettmaths	
<p>30% of a number is 24. Work out the original number.</p>	<p>145% of a number is 1189 Work out the original number.</p>
<p>Construct the angle bisector</p> 	
<p>Jasper feeds his dog $\frac{2}{3}$ of a can of dog food each day. Work out how many cans of dog food are eaten in January.</p> <p>Give your answer as a mixed number.</p>	
<p>The distance from Ballymena to Lisburn is 20a. What is the distance from Ballymena to Antrim?</p> 	
<p>Calculate the perimeter of the sector.</p> 	

29th January  Corbettmaths	
<p>30% of a number is 24. Work out the original number.</p>	<p>145% of a number is 1189 Work out the original number.</p>
<p>Construct the angle bisector</p> 	
<p>Jasper feeds his dog $\frac{2}{3}$ of a can of dog food each day. Work out how many cans of dog food are eaten in January.</p> <p>Give your answer as a mixed number.</p>	
<p>The distance from Ballymena to Lisburn is 20a. What is the distance from Ballymena to Antrim?</p> 	
<p>Calculate the perimeter of the sector.</p> 