
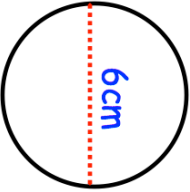


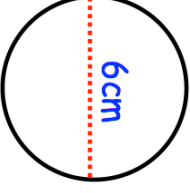



3rd January									
	Calculate the circumference of this circle, leaving your answer in terms of $\pi$								
Expand and simplify $(x + 4)(x + 6)$	Factorise $y^2 + y - 20$								
Shown is a right angled triangle.  Find angle $x$ .									
Jennifer has 36 DVDs. This number of DVDs is 80% more than the number she had last month. How many DVDs did Jennifer have last month?									
Match each of the following	<table border="0"> <tr> <td><math>4x + y</math> _____</td> <td>Expression</td> </tr> <tr> <td><math>x + x + x = 3x</math></td> <td>Equation</td> </tr> <tr> <td><math>5x - 2 = 28</math></td> <td>Formula</td> </tr> <tr> <td><math>V = lwh</math></td> <td>Identity</td> </tr> </table>	$4x + y$ _____	Expression	$x + x + x = 3x$	Equation	$5x - 2 = 28$	Formula	$V = lwh$	Identity
$4x + y$ _____	Expression								
$x + x + x = 3x$	Equation								
$5x - 2 = 28$	Formula								
$V = lwh$	Identity								

3rd January									
	Calculate the circumference of this circle, leaving your answer in terms of $\pi$								
Expand and simplify $(x + 4)(x + 6)$	Factorise $y^2 + y - 20$								
Shown is a right angled triangle.  Find angle $x$ .									
Jennifer has 36 DVDs. This number of DVDs is 80% more than the number she had last month. How many DVDs did Jennifer have last month?									
Match each of the following	<table border="0"> <tr> <td><math>4x + y</math> _____</td> <td>Expression</td> </tr> <tr> <td><math>x + x + x = 3x</math></td> <td>Equation</td> </tr> <tr> <td><math>5x - 2 = 28</math></td> <td>Formula</td> </tr> <tr> <td><math>V = lwh</math></td> <td>Identity</td> </tr> </table>	$4x + y$ _____	Expression	$x + x + x = 3x$	Equation	$5x - 2 = 28$	Formula	$V = lwh$	Identity
$4x + y$ _____	Expression								
$x + x + x = 3x$	Equation								
$5x - 2 = 28$	Formula								
$V = lwh$	Identity								