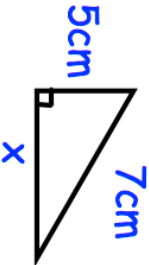
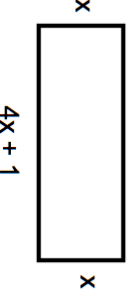
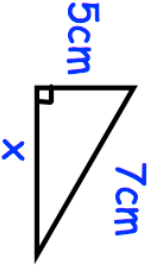
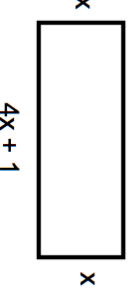


31st January		Corbettmaths	
Find x			
A rectangle is shown below. $2x + 9$		Explain why $4x + 1 = 2x + 9$	
Solve the equation above to find the size of x.		Work out the area of the rectangle.	
Write down the exact value of $\sin 30^\circ$		Write down the exact value of $\tan 45^\circ$	
$a = \begin{pmatrix} 2 \\ -1 \end{pmatrix}$ $b = \begin{pmatrix} 5 \\ 3 \end{pmatrix}$			
Work out $2a - b$ as a column vector			

31st January		Corbettmaths	
Find x			
A rectangle is shown below. $2x + 9$		Explain why $4x + 1 = 2x + 9$	
Solve the equation above to find the size of x.		Work out the area of the rectangle.	
Write down the exact value of $\sin 30^\circ$		Write down the exact value of $\tan 45^\circ$	
$a = \begin{pmatrix} 2 \\ -1 \end{pmatrix}$ $b = \begin{pmatrix} 5 \\ 3 \end{pmatrix}$			
Work out $2a - b$ as a column vector			