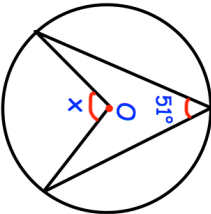

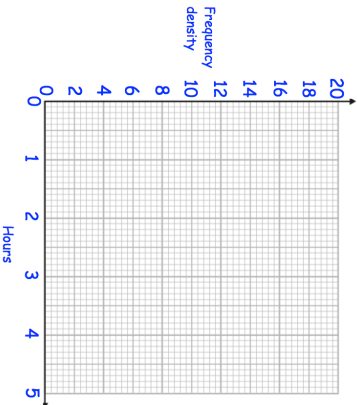
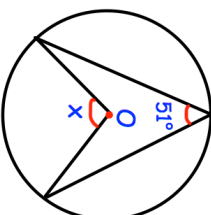

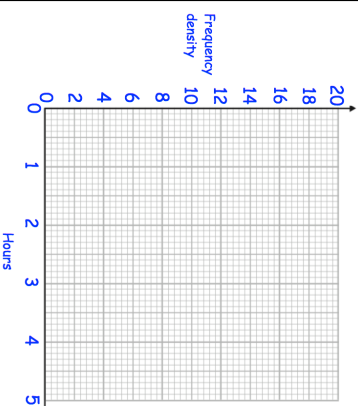


| <p>21st January</p>  | <p>Find x</p> <p style="text-align: right;"> Corbettmaths</p> | | | | | | | | | | | | |
|---|--|-----------|------------------|---|------------------|----|------------------|---|------------------|---|----------------|---|--|
| <table border="1"> <thead> <tr> <th>Waiting time, h</th> <th>Frequency</th> </tr> </thead> <tbody> <tr> <td>$0 < h \leq 0.5$</td> <td>8</td> </tr> <tr> <td>$0.5 < h \leq 1$</td> <td>10</td> </tr> <tr> <td>$1 < h \leq 1.5$</td> <td>7</td> </tr> <tr> <td>$1.5 < h \leq 3$</td> <td>9</td> </tr> <tr> <td>$3 < h \leq 5$</td> <td>6</td> </tr> </tbody> </table> | Waiting time, h | Frequency | $0 < h \leq 0.5$ | 8 | $0.5 < h \leq 1$ | 10 | $1 < h \leq 1.5$ | 7 | $1.5 < h \leq 3$ | 9 | $3 < h \leq 5$ | 6 |  |
| Waiting time, h | Frequency | | | | | | | | | | | | |
| $0 < h \leq 0.5$ | 8 | | | | | | | | | | | | |
| $0.5 < h \leq 1$ | 10 | | | | | | | | | | | | |
| $1 < h \leq 1.5$ | 7 | | | | | | | | | | | | |
| $1.5 < h \leq 3$ | 9 | | | | | | | | | | | | |
| $3 < h \leq 5$ | 6 | | | | | | | | | | | | |
| <p>Draw a histogram for this data.</p> | | | | | | | | | | | | | |
| <p>A is inversely proportional to B.</p> <p>If $A = 10$, $B = 3$.</p> <p>Find B when $A = 15$.</p> | | | | | | | | | | | | | |
| <p>A fair six sided dice is rolled three times.</p> <p>Find the probability of getting exactly one six.</p> | | | | | | | | | | | | | |

| <p>21st January</p>  | <p>Find x</p> <p style="text-align: right;"> Corbettmaths</p> | | | | | | | | | | | | |
|---|--|-----------|------------------|---|------------------|----|------------------|---|------------------|---|----------------|---|--|
| <table border="1"> <thead> <tr> <th>Waiting time, h</th> <th>Frequency</th> </tr> </thead> <tbody> <tr> <td>$0 < h \leq 0.5$</td> <td>8</td> </tr> <tr> <td>$0.5 < h \leq 1$</td> <td>10</td> </tr> <tr> <td>$1 < h \leq 1.5$</td> <td>7</td> </tr> <tr> <td>$1.5 < h \leq 3$</td> <td>9</td> </tr> <tr> <td>$3 < h \leq 5$</td> <td>6</td> </tr> </tbody> </table> | Waiting time, h | Frequency | $0 < h \leq 0.5$ | 8 | $0.5 < h \leq 1$ | 10 | $1 < h \leq 1.5$ | 7 | $1.5 < h \leq 3$ | 9 | $3 < h \leq 5$ | 6 |  |
| Waiting time, h | Frequency | | | | | | | | | | | | |
| $0 < h \leq 0.5$ | 8 | | | | | | | | | | | | |
| $0.5 < h \leq 1$ | 10 | | | | | | | | | | | | |
| $1 < h \leq 1.5$ | 7 | | | | | | | | | | | | |
| $1.5 < h \leq 3$ | 9 | | | | | | | | | | | | |
| $3 < h \leq 5$ | 6 | | | | | | | | | | | | |
| <p>Draw a histogram for this data.</p> | | | | | | | | | | | | | |
| <p>A is inversely proportional to B.</p> <p>If $A = 10$, $B = 3$.</p> <p>Find B when $A = 15$.</p> | | | | | | | | | | | | | |
| <p>A fair six sided dice is rolled three times.</p> <p>Find the probability of getting exactly one six.</p> | | | | | | | | | | | | | |