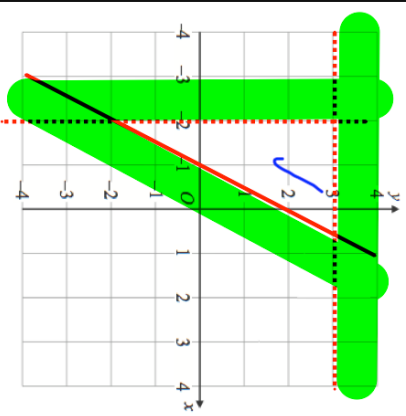
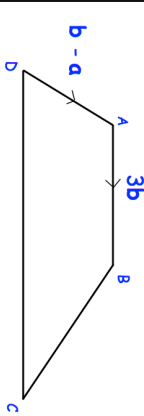
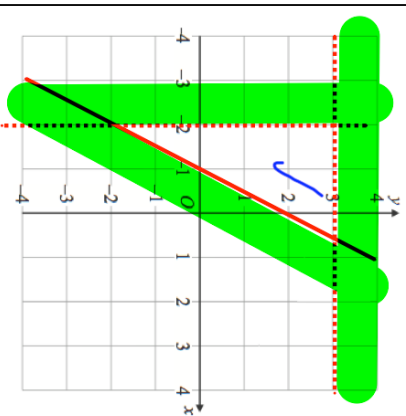
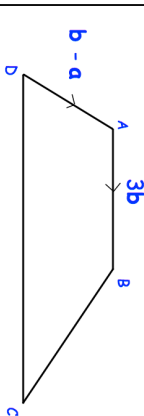


<p>25th January</p>  <p>Corbettmaths</p> <p>The diagram shows a region which satisfies 3 inequalities. Find these inequalities.</p>	
<p>Make w the subject of</p> $a(w - 2) = 5w + k$	
<p>Write 0.81 as a fraction.</p> <p>Give your answer in its simplest form.</p>	
<p>$b - a$</p>  <p>AB and DC are parallel. DC = 2AB</p>	<p>Write down a vector for \overrightarrow{DC}</p>

<p>25th January</p>  <p>Corbettmaths</p> <p>The diagram shows a region which satisfies 3 inequalities. Find these inequalities.</p>	
<p>Make w the subject of</p> $a(w - 2) = 5w + k$	
<p>Write 0.81 as a fraction.</p> <p>Give your answer in its simplest form.</p>	
<p>$b - a$</p>  <p>AB and DC are parallel. DC = 2AB</p>	<p>Write down a vector for \overrightarrow{DC}</p>