
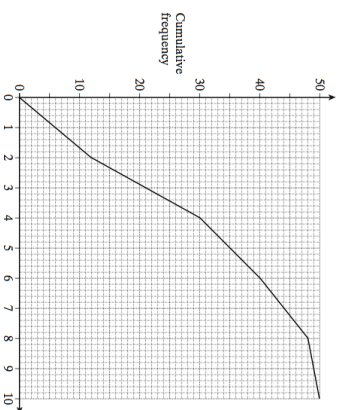



29th January		Corbettmaths 
<p>James, Fred and Kevin each take a penalty</p> <p>The probability James scores is $\frac{4}{5}$</p> <p>The probability Fred scores is $\frac{2}{3}$</p> <p>The probability Kevin scores is $\frac{3}{4}$</p>	Estimate the median	<p>What is the probability that all three miss?</p>
	Estimate the interquartile range.	
<p>A circle has an area of 120cm^2 to the nearest 10cm^2.</p> <p>Work out the upper bound of the radius</p>		
<p>Solve</p> $5y^2 - 4y - 1 = 0$		



29th January		Corbettmaths 
<p>James, Fred and Kevin each take a penalty</p> <p>The probability James scores is $\frac{4}{5}$</p> <p>The probability Fred scores is $\frac{2}{3}$</p> <p>The probability Kevin scores is $\frac{3}{4}$</p>	Estimate the median	<p>What is the probability that all three miss?</p>
	Estimate the interquartile range.	
<p>A circle has an area of 120cm^2 to the nearest 10cm^2.</p> <p>Work out the upper bound of the radius</p>		
<p>Solve</p> $5y^2 - 4y - 1 = 0$		

