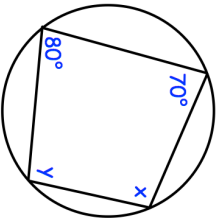

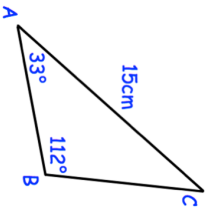
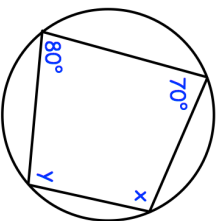

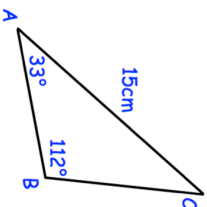


<p>3rd January</p> 	<p>Find x and y</p> <p style="text-align: right;">Corbettmaths</p>
<p>Simplify $\sqrt{8}$</p>	
<p>A biased coin is flipped three times.</p>  <p>The probability of the coin landing on tails is 0.7</p>	<p>Find the probability the coin lands on tails exactly once.</p>
<p>A circular mirror has a diameter of 60cm to the nearest centimetre.</p> <p>Find the greatest possible area of the mirror.</p> <p>Give your answer in cm^2</p>	
	<p>Work out the length of BC</p>

<p>3rd January</p> 	<p>Find x and y</p> <p style="text-align: right;">Corbettmaths</p>
<p>Simplify $\sqrt{8}$</p>	
<p>A biased coin is flipped three times.</p>  <p>The probability of the coin landing on tails is 0.7</p>	<p>Find the probability the coin lands on tails exactly once.</p>
<p>A circular mirror has a diameter of 60cm to the nearest centimetre.</p> <p>Find the greatest possible area of the mirror.</p> <p>Give your answer in cm^2</p>	
	<p>Work out the length of BC</p>