
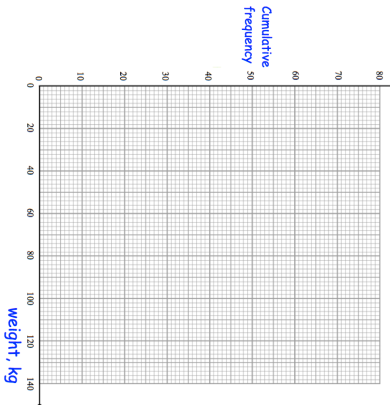


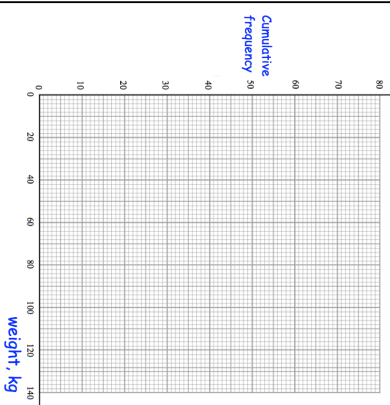



<b>5th January</b>  <b>Estimate <math>\sqrt[4]{5000}</math></b>	 Corbettmaths																
Solve, giving your answers to one decimal place.  $x^2 - 8 = x$																	
<table border="1"> <thead> <tr> <th>Weight, w kg</th> <th>Cumulative frequency</th> </tr> </thead> <tbody> <tr><td><math>0 &lt; w \leq 20</math></td><td>2</td></tr> <tr><td><math>0 &lt; w \leq 40</math></td><td>6</td></tr> <tr><td><math>0 &lt; w \leq 60</math></td><td>15</td></tr> <tr><td><math>0 &lt; w \leq 80</math></td><td>36</td></tr> <tr><td><math>0 &lt; w \leq 100</math></td><td>58</td></tr> <tr><td><math>0 &lt; w \leq 120</math></td><td>73</td></tr> <tr><td><math>0 &lt; w \leq 140</math></td><td>80</td></tr> </tbody> </table> <p>Draw a cumulative frequency graph for this information.</p>	Weight, w kg	Cumulative frequency	$0 < w \leq 20$	2	$0 < w \leq 40$	6	$0 < w \leq 60$	15	$0 < w \leq 80$	36	$0 < w \leq 100$	58	$0 < w \leq 120$	73	$0 < w \leq 140$	80	
Weight, w kg	Cumulative frequency																
$0 < w \leq 20$	2																
$0 < w \leq 40$	6																
$0 < w \leq 60$	15																
$0 < w \leq 80$	36																
$0 < w \leq 100$	58																
$0 < w \leq 120$	73																
$0 < w \leq 140$	80																
Find the area of the rectangle  $\sqrt{10}$ cm  $\sqrt{5}$ cm																	

<b>5th January</b>  <b>Estimate <math>\sqrt[4]{5000}</math></b>	 Corbettmaths																
Solve, giving your answers to one decimal place.  $x^2 - 8 = x$																	
<table border="1"> <thead> <tr> <th>Weight, w kg</th> <th>Cumulative frequency</th> </tr> </thead> <tbody> <tr><td><math>0 &lt; w \leq 20</math></td><td>2</td></tr> <tr><td><math>0 &lt; w \leq 40</math></td><td>6</td></tr> <tr><td><math>0 &lt; w \leq 60</math></td><td>15</td></tr> <tr><td><math>0 &lt; w \leq 80</math></td><td>36</td></tr> <tr><td><math>0 &lt; w \leq 100</math></td><td>58</td></tr> <tr><td><math>0 &lt; w \leq 120</math></td><td>73</td></tr> <tr><td><math>0 &lt; w \leq 140</math></td><td>80</td></tr> </tbody> </table> <p>Draw a cumulative frequency graph for this information.</p>	Weight, w kg	Cumulative frequency	$0 < w \leq 20$	2	$0 < w \leq 40$	6	$0 < w \leq 60$	15	$0 < w \leq 80$	36	$0 < w \leq 100$	58	$0 < w \leq 120$	73	$0 < w \leq 140$	80	
Weight, w kg	Cumulative frequency																
$0 < w \leq 20$	2																
$0 < w \leq 40$	6																
$0 < w \leq 60$	15																
$0 < w \leq 80$	36																
$0 < w \leq 100$	58																
$0 < w \leq 120$	73																
$0 < w \leq 140$	80																
Find the area of the rectangle  $\sqrt{10}$ cm  $\sqrt{5}$ cm																	