
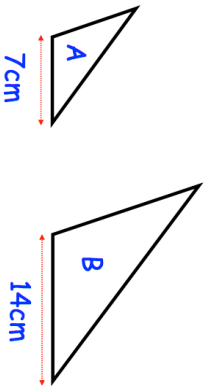
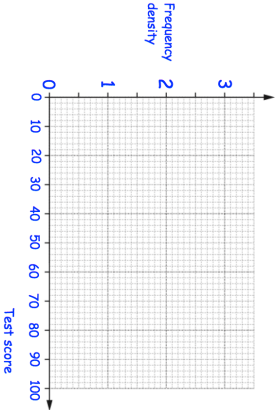

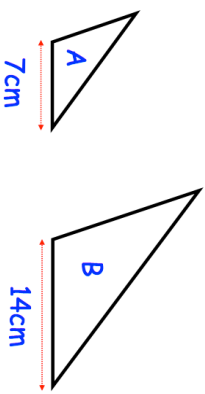
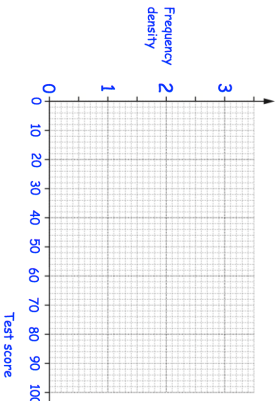


9th January	Corbettmaths 												
	<p>The area of triangle A is 20cm^2 Work out the area of triangle B.</p>												
<p>Solve $2x^2 + 5x + 2 = 0$</p>													
<table border="1"> <thead> <tr> <th>Test score, x</th> <th>Frequency</th> </tr> </thead> <tbody> <tr> <td>$0 < x \leq 30$</td> <td>15</td> </tr> <tr> <td>$30 < x \leq 40$</td> <td>22</td> </tr> <tr> <td>$40 < x \leq 50$</td> <td>28</td> </tr> <tr> <td>$50 < x \leq 70$</td> <td>30</td> </tr> <tr> <td>$70 < x \leq 100$</td> <td>9</td> </tr> </tbody> </table>	Test score, x	Frequency	$0 < x \leq 30$	15	$30 < x \leq 40$	22	$40 < x \leq 50$	28	$50 < x \leq 70$	30	$70 < x \leq 100$	9	
Test score, x	Frequency												
$0 < x \leq 30$	15												
$30 < x \leq 40$	22												
$40 < x \leq 50$	28												
$50 < x \leq 70$	30												
$70 < x \leq 100$	9												
<p>Draw a histogram for this data.</p>													
<p>At a rugby match, the ratio of women to men is 4:3. The ratio of men to children is 2:5. What percentage of the people at the rugby match are children?</p>													

9th January	Corbettmaths 												
	<p>The area of triangle A is 20cm^2 Work out the area of triangle B.</p>												
<p>Solve $2x^2 + 5x + 2 = 0$</p>													
<table border="1"> <thead> <tr> <th>Test score, x</th> <th>Frequency</th> </tr> </thead> <tbody> <tr> <td>$0 < x \leq 30$</td> <td>15</td> </tr> <tr> <td>$30 < x \leq 40$</td> <td>22</td> </tr> <tr> <td>$40 < x \leq 50$</td> <td>28</td> </tr> <tr> <td>$50 < x \leq 70$</td> <td>30</td> </tr> <tr> <td>$70 < x \leq 100$</td> <td>9</td> </tr> </tbody> </table>	Test score, x	Frequency	$0 < x \leq 30$	15	$30 < x \leq 40$	22	$40 < x \leq 50$	28	$50 < x \leq 70$	30	$70 < x \leq 100$	9	
Test score, x	Frequency												
$0 < x \leq 30$	15												
$30 < x \leq 40$	22												
$40 < x \leq 50$	28												
$50 < x \leq 70$	30												
$70 < x \leq 100$	9												
<p>Draw a histogram for this data.</p>													
<p>At a rugby match, the ratio of women to men is 4:3. The ratio of men to children is 2:5. What percentage of the people at the rugby match are children?</p>													