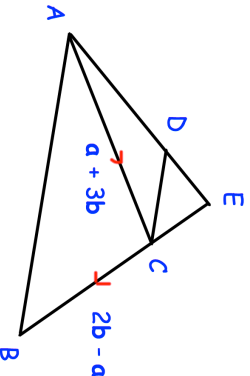
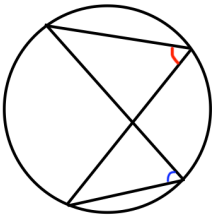
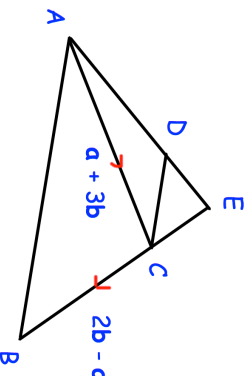
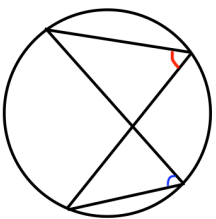


14th January	Corbettmaths
Find the value of 32 $\frac{2}{5}$	
 <p>Find the vector \vec{AB}</p>	Prove DC is parallel to AB
$\vec{EC} = \frac{1}{5}\vec{CB}$ $\vec{DE} = \frac{1}{5}\vec{a}$	Prove DC is parallel to AB
 <p>Prove the angles in the same segment are equal.</p>	
Write $\frac{4}{\sqrt{5}} - \sqrt{2\frac{2}{9}}$ in the form $k\sqrt{5}$	

14th January	Corbettmaths
Find the value of 32 $\frac{2}{5}$	
 <p>Find the vector \vec{AB}</p>	Prove DC is parallel to AB
$\vec{EC} = \frac{1}{5}\vec{CB}$ $\vec{DE} = \frac{1}{5}\vec{a}$	Prove DC is parallel to AB
 <p>Prove the angles in the same segment are equal.</p>	
Write $\frac{4}{\sqrt{5}} - \sqrt{2\frac{2}{9}}$ in the form $k\sqrt{5}$	