
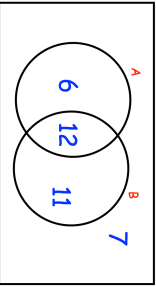

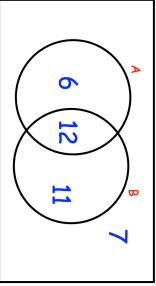


<b>15th January</b> Factorise completely $x^3 - 25x$		 Corbettmaths														
The square of $w$ is 5 Write down the value of $w^5$																
$\xi$ 	Find the probability of B given A.															
<table border="1"> <thead> <tr> <th>Weight (<math>x</math> kg)</th> <th>Frequency</th> </tr> </thead> <tbody> <tr> <td><math>60 &lt; x \leq 64</math></td> <td>10</td> </tr> <tr> <td><math>64 &lt; x \leq 68</math></td> <td>20</td> </tr> <tr> <td><math>68 &lt; x \leq 72</math></td> <td>30</td> </tr> <tr> <td><math>72 &lt; x \leq 76</math></td> <td>15</td> </tr> <tr> <td><math>76 &lt; x \leq 80</math></td> <td>18</td> </tr> <tr> <td><math>80 &lt; x \leq 84</math></td> <td>7</td> </tr> </tbody> </table>	Weight ( $x$ kg)	Frequency	$60 < x \leq 64$	10	$64 < x \leq 68$	20	$68 < x \leq 72$	30	$72 < x \leq 76$	15	$76 < x \leq 80$	18	$80 < x \leq 84$	7	Calculate an estimate of the median	
Weight ( $x$ kg)	Frequency															
$60 < x \leq 64$	10															
$64 < x \leq 68$	20															
$68 < x \leq 72$	30															
$72 < x \leq 76$	15															
$76 < x \leq 80$	18															
$80 < x \leq 84$	7															
A curve has equation $y = ax^2 + bx + c$ The curve crosses the x-axis at (3, 0) and (4, 0) The curve crosses the y-axis at (0, 12)	Find the values of $a$ , $b$ and $c$ .															

<b>15th January</b> Factorise completely $x^3 - 25x$		 Corbettmaths														
The square of $w$ is 5 Write down the value of $w^5$																
$\xi$ 	Find the probability of B given A.															
<table border="1"> <thead> <tr> <th>Weight (<math>x</math> kg)</th> <th>Frequency</th> </tr> </thead> <tbody> <tr> <td><math>60 &lt; x \leq 64</math></td> <td>10</td> </tr> <tr> <td><math>64 &lt; x \leq 68</math></td> <td>20</td> </tr> <tr> <td><math>68 &lt; x \leq 72</math></td> <td>30</td> </tr> <tr> <td><math>72 &lt; x \leq 76</math></td> <td>15</td> </tr> <tr> <td><math>76 &lt; x \leq 80</math></td> <td>18</td> </tr> <tr> <td><math>80 &lt; x \leq 84</math></td> <td>7</td> </tr> </tbody> </table>	Weight ( $x$ kg)	Frequency	$60 < x \leq 64$	10	$64 < x \leq 68$	20	$68 < x \leq 72$	30	$72 < x \leq 76$	15	$76 < x \leq 80$	18	$80 < x \leq 84$	7	Calculate an estimate of the median	
Weight ( $x$ kg)	Frequency															
$60 < x \leq 64$	10															
$64 < x \leq 68$	20															
$68 < x \leq 72$	30															
$72 < x \leq 76$	15															
$76 < x \leq 80$	18															
$80 < x \leq 84$	7															
A curve has equation $y = ax^2 + bx + c$ The curve crosses the x-axis at (3, 0) and (4, 0) The curve crosses the y-axis at (0, 12)	Find the values of $a$ , $b$ and $c$ .															