

27th January



Write **1.24** as a mixed number.
Give your answer in its simplest form.

Write in the form $a\sqrt{2}$

$$\sqrt{72} + \sqrt{3} \times \sqrt{6}$$

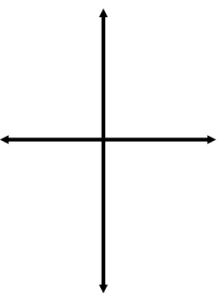
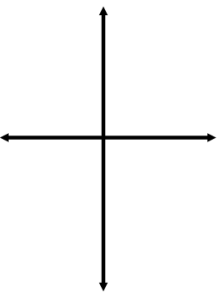
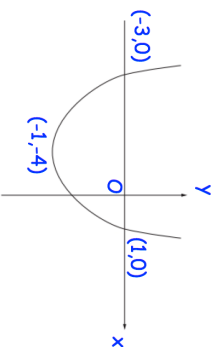
Calculate an estimate of the interquartile range.

Mass (m kg)	Frequency
$40 < m \leq 45$	64
$45 < m \leq 50$	74
$50 < m \leq 55$	155
$55 < m \leq 60$	80
$60 < m \leq 65$	26
$65 < m \leq 70$	1

Shown is the graph of the function $y = f(x)$

Sketch

- (a) $-f(x)$
(b) $f(x + p)$ where $0 < p < 1$



27th January



Write **1.24** as a mixed number.
Give your answer in its simplest form.

Write in the form $a\sqrt{2}$

$$\sqrt{72} + \sqrt{3} \times \sqrt{6}$$

Calculate an estimate of the interquartile range.

Mass (m kg)	Frequency
$40 < m \leq 45$	64
$45 < m \leq 50$	74
$50 < m \leq 55$	155
$55 < m \leq 60$	80
$60 < m \leq 65$	26
$65 < m \leq 70$	1

Shown is the graph of the function $y = f(x)$

Sketch

- (a) $-f(x)$
(b) $f(x + p)$ where $0 < p < 1$

