

Name: _____

5-a-day

Numeracy



14th January

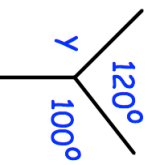
James has 12 **five pence pieces**
How much money does he have in total?

Corbettmaths

4 8 16 32

What are the next two numbers?

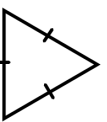
What is the rule for the sequence above?



Find the size of angle y .

Work out 27×44

What type of triangle is shown below



Draw a right angled triangle below

Name: _____

5-a-day

Numeracy



14th January

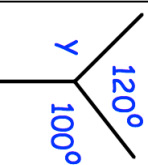
James has 12 **five pence pieces**
How much money does he have in total?

Corbettmaths

4 8 16 32

What are the next two numbers?

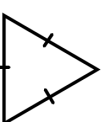
What is the rule for the sequence above?



Find the size of angle y .

Work out 27×44

What type of triangle is shown below



Draw a right angled triangle below