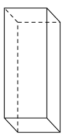


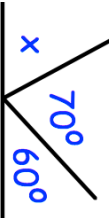
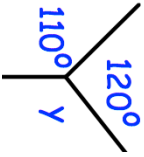



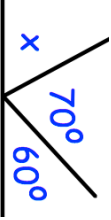
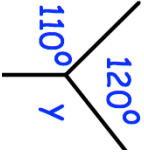


17th January		Corbettmaths						
 A	 B	 C						
Shape A is called a Shape B is called a Shape C is called a								
There are 23 passengers on a bus.	How many passengers are now on the bus?							
At a stop, 14 passengers get off the bus and 8 passengers get on the bus.								
<table border="1" style="width: 100%; text-align: center;"> <tr> <td>2</td> <td>11</td> <td>7</td> </tr> <tr> <td>3</td> <td>13</td> <td>9</td> </tr> </table>	2	11	7	3	13	9	From the numbers in the rectangle, write down the number which is not prime.	
2	11	7						
3	13	9						
	Find x							
	Find y							

17th January		Corbettmaths						
 A	 B	 C						
Shape A is called a Shape B is called a Shape C is called a								
There are 23 passengers on a bus.	How many passengers are now on the bus?							
At a stop, 14 passengers get off the bus and 8 passengers get on the bus.								
<table border="1" style="width: 100%; text-align: center;"> <tr> <td>2</td> <td>11</td> <td>7</td> </tr> <tr> <td>3</td> <td>13</td> <td>9</td> </tr> </table>	2	11	7	3	13	9	From the numbers in the rectangle, write down the number which is not prime.	
2	11	7						
3	13	9						
	Find x							
	Find y							