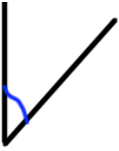

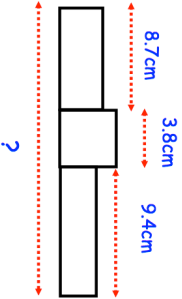
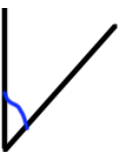
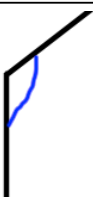
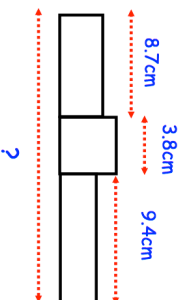


<b>22nd January</b> Fred has 13 twenty pence pieces. What is the total value of these coins?	Corbettmaths Mary has 200 fifty pence pieces. What is the total value of these coins?
 <p>What type of angle is above?</p>	 <p>What type of angle is shown above?</p>
Work out $\frac{4}{9}$ of 72kg	
	Find the total length of the three blocks
Here are the first four terms of a number sequence. 12 15 18 21 Write down the next term of the number sequence	Explain how you found your answer.

<b>22nd January</b> Fred has 13 twenty pence pieces. What is the total value of these coins?	Corbettmaths Mary has 200 fifty pence pieces. What is the total value of these coins?
 <p>What type of angle is above?</p>	 <p>What type of angle is shown above?</p>
Work out $\frac{4}{9}$ of 72kg	
	Find the total length of the three blocks
Here are the first four terms of a number sequence. 12 15 18 21 Write down the next term of the number sequence	Explain how you found your answer.