
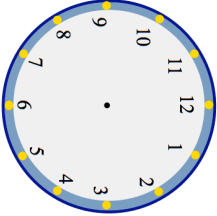
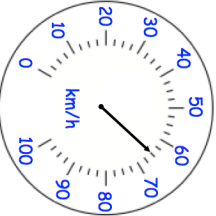


Name: _____

5-a-day


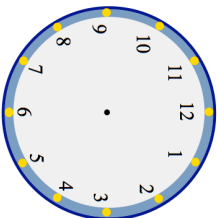
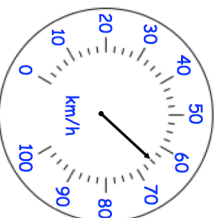
Numeracy

| | | | | | | | | | |
|--|--|---------|--|--------|--|-------|--|--------|--|
| 25th January  | | | | | | | | | |
|  | Show the time 9:35 on the clock | | | | | | | | |
| Patrick receives 14 phone calls in a week. Andrew receives 10 phone calls. David receives 8 phone calls. George receives 11 phone calls. Show this information on a pictogram. | <table border="1"><tr><td>Patrick</td><td></td></tr><tr><td>Andrew</td><td></td></tr><tr><td>David</td><td></td></tr><tr><td>George</td><td></td></tr></table> | Patrick | | Andrew | | David | | George | |
| Patrick | | | | | | | | | |
| Andrew | | | | | | | | | |
| David | | | | | | | | | |
| George | | | | | | | | | |
| How many phone calls were received in total? | Key: <input type="text"/> | | | | | | | | |
| Menu Tea £1.35 Coffee £1.80 Score £1.30 Biscuit 70p | Henry buys a tea, a coffee and a biscuit. Work out the total cost. | | | | | | | | |
|  | The speed limit is 80 kilometres per hour. How many kilometres per hour slower than the speed limit is the car travelling? | | | | | | | | |

Name: _____

5-a-day

Numeracy

| | | | | | | | | | |
|--|--|---------|--|--------|--|-------|--|--------|--|
| 25th January  | | | | | | | | | |
|  | Show the time 9:35 on the clock | | | | | | | | |
| Patrick receives 14 phone calls in a week. Andrew receives 10 phone calls. David receives 8 phone calls. George receives 11 phone calls. Show this information on a pictogram. | <table border="1"><tr><td>Patrick</td><td></td></tr><tr><td>Andrew</td><td></td></tr><tr><td>David</td><td></td></tr><tr><td>George</td><td></td></tr></table> | Patrick | | Andrew | | David | | George | |
| Patrick | | | | | | | | | |
| Andrew | | | | | | | | | |
| David | | | | | | | | | |
| George | | | | | | | | | |
| How many phone calls were received in total? | Key: <input type="text"/> | | | | | | | | |
| Menu Tea £1.35 Coffee £1.80 Score £1.30 Biscuit 70p | Henry buys a tea, a coffee and a biscuit. Work out the total cost. | | | | | | | | |
|  | The speed limit is 80 kilometres per hour. How many kilometres per hour slower than the speed limit is the car travelling? | | | | | | | | |