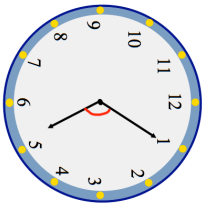
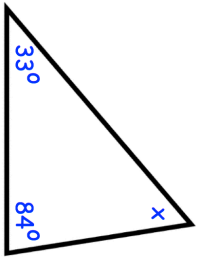


Name: _____

5-a-day

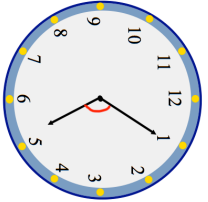
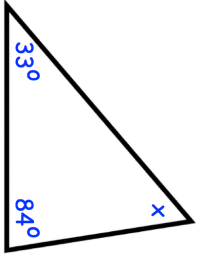
Numeracy

26th January	What time is shown on the clock? 	Corbettmaths
Circle the type of angle marked between the hour and minute hand. Acute Right Obtuse Reflex		
Find the size of the missing angle.		
Which of the fractions are equivalent to $\frac{3}{4}$	$\frac{6}{8}$ $\frac{10}{15}$ $\frac{18}{24}$	
Donna has held a raffle to raise money for charity She sold 90 tickets. The prizes cost £16. How much money did she raise?	Raffle Tickets 50p each	

Name: _____

5-a-day

Numeracy

26th January	What time is shown on the clock? 	Corbettmaths
Circle the type of angle marked between the hour and minute hand. Acute Right Obtuse Reflex		
Find the size of the missing angle.		
Which of the fractions are equivalent to $\frac{3}{4}$	$\frac{6}{8}$ $\frac{10}{15}$ $\frac{18}{24}$	
Donna has held a raffle to raise money for charity She sold 90 tickets. The prizes cost £16. How much money did she raise?	Raffle Tickets 50p each	