
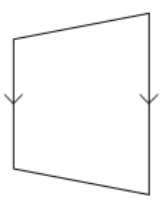
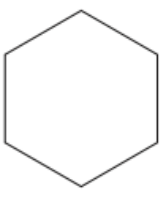



Name: \_\_\_\_\_

5-a-day


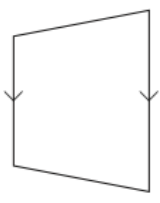
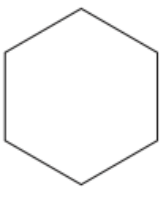

Numeracy

<b>27th January</b>		 Corbettmaths
		Name this shape
Find the perimeter of the square.	 <b>3cm</b>	Name this shape
James left his house at 08:15 He arrived at the beach at 10:07 How long did the journey take?	Not drawn accurately	
Arrange these numbers in order of size, starting with the smallest. one billion half a million six hundred and ten thousand ninety seven thousand two million		
Write $\frac{4}{5}$ as a percentage.		Write 30% as a fraction. Give your answer in its simplest form.

Name: \_\_\_\_\_

5-a-day

Numeracy

<b>27th January</b>		 Corbettmaths
		Name this shape
Find the perimeter of the square.	 <b>3cm</b>	Name this shape
James left his house at 08:15 He arrived at the beach at 10:07 How long did the journey take?	Not drawn accurately	
Arrange these numbers in order of size, starting with the smallest. one billion half a million six hundred and ten thousand ninety seven thousand two million		
Write $\frac{4}{5}$ as a percentage.		Write 30% as a fraction. Give your answer in its simplest form.