

Name: _____

5-a-day

Numeracy

3rd January

Anna has eleven **fifty pence** pieces.



How much money does Anna have in total?

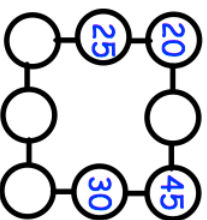


Draw a line parallel to the line AB.

A _____
B

In the diagram, three circles in a straight line **must add to 100.**

Write in the missing numbers.



Draw all the **lines of symmetry** on the square below



Draw all the **lines of symmetry** on the rectangle below



Multiply 29 by 7

Name: _____

5-a-day

Numeracy

3rd January

Anna has eleven **fifty pence** pieces.



How much money does Anna have in total?

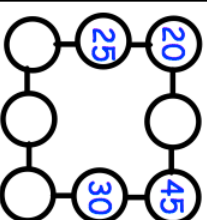


Draw a line parallel to the line AB.


A _____
B

In the diagram, three circles in a straight line **must add to 100.**

Write in the missing numbers.



Draw all the **lines of symmetry** on the square below



Draw all the **lines of symmetry** on the rectangle below



Multiply 29 by 7