


Name: \_\_\_\_\_

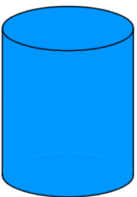
5-a-day

Numeracy

6th January



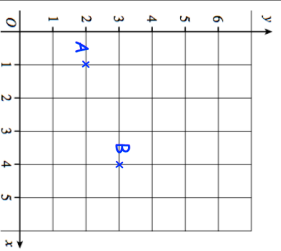
Name this solid



Name this solid

Write down the value of the **6** in the number 17629.

Write down the coordinates of the point A



Write down the coordinates of the point B

Work out 8 squared.

Work out 12 squared.

Mary has £1.20

David has £2


How much money should David give Mary so they have the same amount?

Name: \_\_\_\_\_


5-a-day

Numeracy

6th January



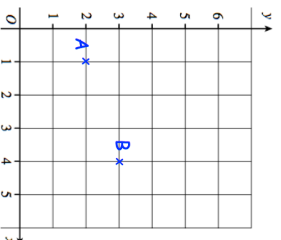
Name this solid



Name this solid

Write down the value of the **6** in the number 17629.

Write down the coordinates of the point A



Write down the coordinates of the point B

Work out 8 squared.

Work out 12 squared.

Mary has £1.20

David has £2

How much money should David give Mary so they have the same amount?