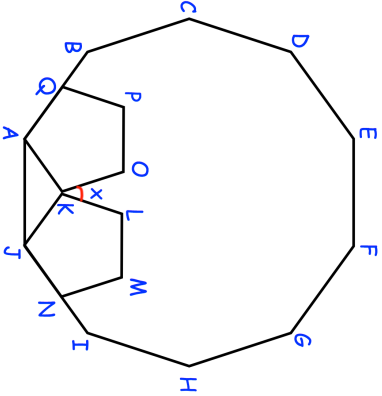
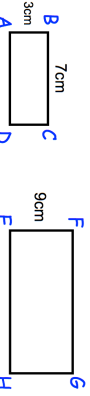
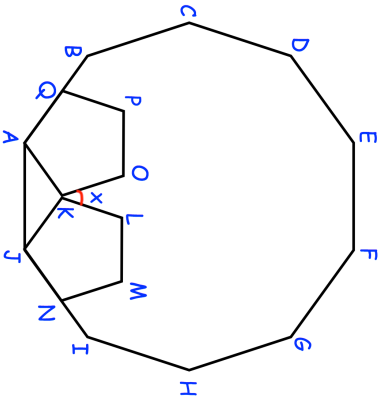
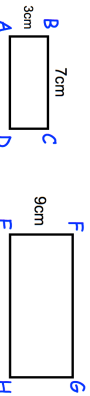


<p><b>15th June</b></p> <p>n is an integer.</p> $-2 < n \leq 4$ <p>List the possible values of n.</p>	<p>Corbettmaths</p>
 <p>ABCDEFGHIJ is a regular decagon JKLMN and AQPOK are congruent, regular pentagons.</p> <p>Find x.</p>	<p>Find the ratio of red cards to yellow cards that are now in the pack. Give your answer in its simplest form.</p> <p>10 yellow cards are removed from the pack.</p>
<p>There are 45 cards in a pack. Each card is red or yellow. The ratio of the number of red cards to yellow cards is 1 : 2</p> <p>10 yellow cards are removed from the pack.</p>	<p>Work out the area of EFGH</p>
<p>Not drawn accurately</p>  <p>Rectangles ABCD and EFGH are similar.</p>	

<p><b>15th June</b></p> <p>n is an integer.</p> $-2 < n \leq 4$ <p>List the possible values of n.</p>	<p>Corbettmaths</p>
 <p>ABCDEFGHIJ is a regular decagon JKLMN and AQPOK are congruent, regular pentagons.</p> <p>Find x.</p>	<p>Find the ratio of red cards to yellow cards that are now in the pack. Give your answer in its simplest form.</p> <p>10 yellow cards are removed from the pack.</p>
<p>There are 45 cards in a pack. Each card is red or yellow. The ratio of the number of red cards to yellow cards is 1 : 2</p> <p>10 yellow cards are removed from the pack.</p>	<p>Work out the area of EFGH</p>
<p>Not drawn accurately</p>  <p>Rectangles ABCD and EFGH are similar.</p>	