
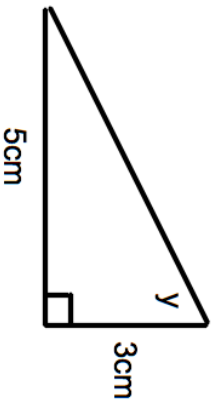
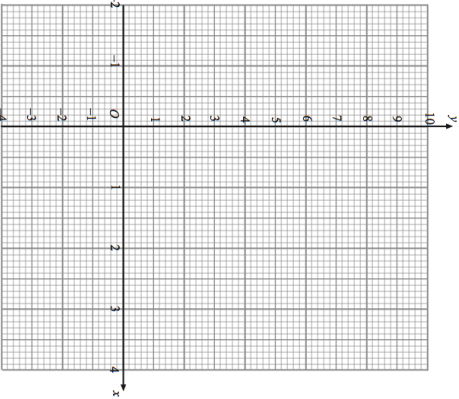

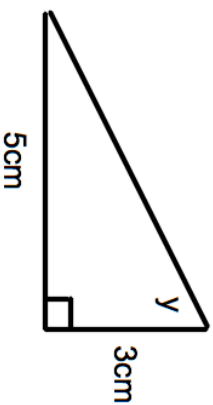
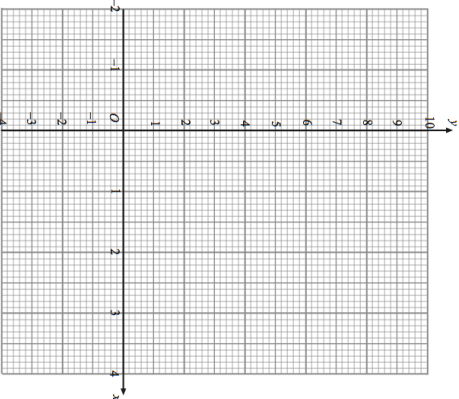


18th June	 Corbettmaths																
<p>A water tank is two-thirds full. A quarter of a full tank is poured out. What fraction of a tank is left?</p>																	
	Calculate angle y																
<p>Complete the table of values for $y = x^2 - 3x$</p> <table border="1" data-bbox="767 147 815 551"> <tr> <td>x</td> <td>-2</td> <td>-1</td> <td>0</td> <td>1</td> <td>2</td> <td>3</td> <td>4</td> </tr> <tr> <td>y</td> <td>10</td> <td></td> <td>0</td> <td>-2</td> <td></td> <td>0</td> <td></td> </tr> </table>	x	-2	-1	0	1	2	3	4	y	10		0	-2		0		
x	-2	-1	0	1	2	3	4										
y	10		0	-2		0											
<p>On the grid, draw the graph of $y = x^2 - 3x$ for the values of x from -2 to 4.</p>																	
<p>Solve these simultaneous equations</p> $4x + 9y = 10$ $2x + 3y = 2$																	

18th June	 Corbettmaths																
<p>A water tank is two-thirds full. A quarter of a full tank is poured out. What fraction of a tank is left?</p>																	
	Calculate angle y																
<p>Complete the table of values for $y = x^2 - 3x$</p> <table border="1" data-bbox="767 1238 815 1641"> <tr> <td>x</td> <td>-2</td> <td>-1</td> <td>0</td> <td>1</td> <td>2</td> <td>3</td> <td>4</td> </tr> <tr> <td>y</td> <td>10</td> <td></td> <td>0</td> <td>-2</td> <td></td> <td>0</td> <td></td> </tr> </table>	x	-2	-1	0	1	2	3	4	y	10		0	-2		0		
x	-2	-1	0	1	2	3	4										
y	10		0	-2		0											
<p>On the grid, draw the graph of $y = x^2 - 3x$ for the values of x from -2 to 4.</p>																	
<p>Solve these simultaneous equations</p> $4x + 9y = 10$ $2x + 3y = 2$																	