
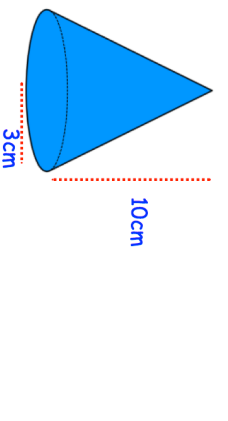

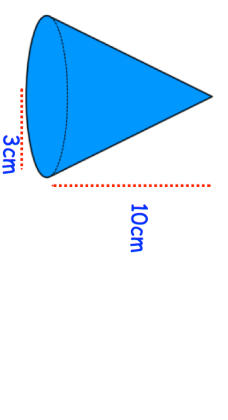


2nd June		Corbettmaths 
<p>The front elevation of a solid shape is a triangle. The side elevation of the solid shape is a triangle. The plan view of the solid shape is a circle.</p>	Write down the name of the shape.	
<p>James has x pence. Hannah has 5 pence more than James. Liam has 2 pence less than James. The total amount of money they have is 75 pence.</p>	Use this information to write down an equation in x .	
Solve the equation to find out how much money James has	How much money does Liam have?	
	Calculate the volume of the cone.	
<p>A man's salary has increased by 5% and is now £441 a week. What was his salary before the increase?</p>		

2nd June		Corbettmaths 
<p>The front elevation of a solid shape is a triangle. The side elevation of the solid shape is a triangle. The plan view of the solid shape is a circle.</p>	Write down the name of the shape.	
<p>James has x pence. Hannah has 5 pence more than James. Liam has 2 pence less than James. The total amount of money they have is 75 pence.</p>	Use this information to write down an equation in x .	
Solve the equation to find out how much money James has	How much money does Liam have?	
	Calculate the volume of the cone.	
<p>A man's salary has increased by 5% and is now £441 a week. What was his salary before the increase?</p>		