
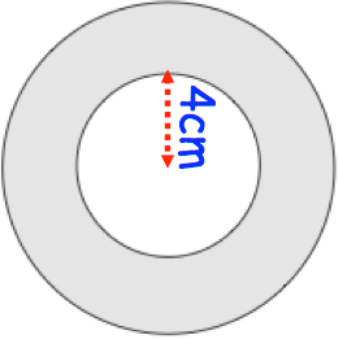

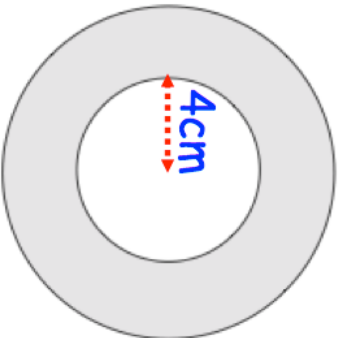


<b>23rd June</b>	 Corbettmaths	
<p>The size of an interior angle, for a regular polygon, is <math>176^\circ</math>.</p> <p>How many sides does it have?</p>		
	<p>Find the shaded area.</p>	<p>The number of days taken to build the house is found by</p> $T = \frac{90}{n}$ <p>where n is the number of builders.</p>
<p>The time, T days, to build a house, is inversely proportional to the number of builders, n, building the house.</p>	<p>A house takes 15 days to build. How many builders work on the house?</p>	

<b>23rd June</b>	 Corbettmaths	
<p>The size of an interior angle, for a regular polygon, is <math>176^\circ</math>.</p> <p>How many sides does it have?</p>		
	<p>Find the shaded area.</p>	<p>The number of days taken to build the house is found by</p> $T = \frac{90}{n}$ <p>where n is the number of builders.</p>
<p>The time, T days, to build a house, is inversely proportional to the number of builders, n, building the house.</p>	<p>A house takes 15 days to build. How many builders work on the house?</p>	