
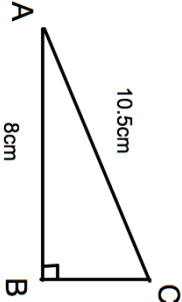


Name: _____

5-a-day


Foundation Plus

4th June Write down an estimate for $\sqrt{74}$	 Corbettmaths
Last month James weighed 80kg This month James weighs 78kg Calculate the percentage decrease.	
Solve $\frac{8x - 3}{3} = 6x$	
$E = \{1, 2, 3, 4, 5, 6, 7, 8, 9, 10, 11, 12\}$ $A = \{\text{numbers greater than } 6\}$ $B = \{\text{prime numbers}\}$ Draw a Venn diagram for this information.	
Calculate the size of angle ACB.	

Name: _____

5-a-day

Foundation Plus

4th June Write down an estimate for $\sqrt{74}$	 Corbettmaths
Last month James weighed 80kg This month James weighs 78kg Calculate the percentage decrease.	
Solve $\frac{8x - 3}{3} = 6x$	
$E = \{1, 2, 3, 4, 5, 6, 7, 8, 9, 10, 11, 12\}$ $A = \{\text{numbers greater than } 6\}$ $B = \{\text{prime numbers}\}$ Draw a Venn diagram for this information.	
Calculate the size of angle ACB.	