
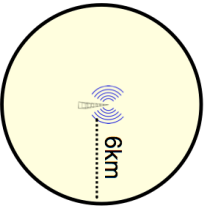


Name: _____

5-a-day


Foundation

12th June A tea costs 45p What is 45p as a fraction of £1.35	 Corbettmaths Give your answer in its simplest form.
Expand $5(a + c)$	Expand $10(x + 4)$
Calculate the n th term $3 \quad 7 \quad 11 \quad 15 \quad \dots$	Is 501 a term in the sequence?
Use your calculator to work out the value of $\frac{2.12 \times 5.2}{9.21 - 2.8}$ Write down all the figures on your calculator display.	
Calculate the area of the circle	

Name: _____

5-a-day

Foundation

12th June A tea costs 45p What is 45p as a fraction of £1.35	 Corbettmaths Give your answer in its simplest form.
Expand $5(a + c)$	Expand $10(x + 4)$
Calculate the n th term $3 \quad 7 \quad 11 \quad 15 \quad \dots$	Is 501 a term in the sequence?
Use your calculator to work out the value of $\frac{2.12 \times 5.2}{9.21 - 2.8}$ Write down all the figures on your calculator display.	
Calculate the area of the circle	