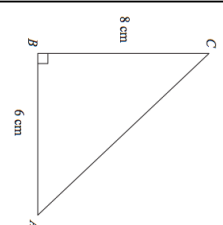
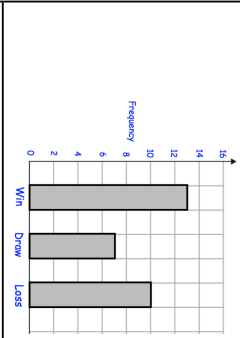


Name: _____

5-a-day

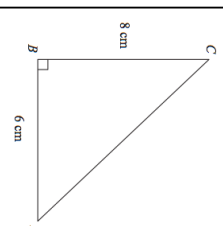
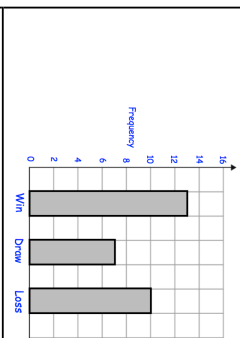
Foundation

<p>18th June</p> <p>Corbettmaths</p>   <p>Increase \$5000 by 3%</p>	<p>Calculate the area of the triangle</p> <p>How many matches did the team play?</p> <p>Decrease 600cm by 40%</p>
<p>Using the information that</p> $3.9 \times 62 = 241.8$ <p>write down the value of (a) 3.9×620</p>	<p>(b) 39×0.62</p>
<p>The timetable for a flight from London to Beijing is shown.</p> <p>Departure from London 5 August 20:25 Arrival in Beijing 6 August 13:10</p> <p>When it is 1pm in London, it is 8pm in Beijing.</p>	<p>How long should the journey take? Give your answer in hours and minutes.</p>

Name: _____

5-a-day

Foundation

<p>18th June</p> <p>Corbettmaths</p>   <p>Increase \$5000 by 3%</p>	<p>Calculate the area of the triangle</p> <p>How many matches did the team play?</p> <p>Decrease 600cm by 40%</p>
<p>Using the information that</p> $3.9 \times 62 = 241.8$ <p>write down the value of (a) 3.9×620</p>	<p>(b) 39×0.62</p>
<p>The timetable for a flight from London to Beijing is shown.</p> <p>Departure from London 5 August 20:25 Arrival in Beijing 6 August 13:10</p> <p>When it is 1pm in London, it is 8pm in Beijing.</p>	<p>How long should the journey take? Give your answer in hours and minutes.</p>