
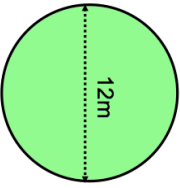
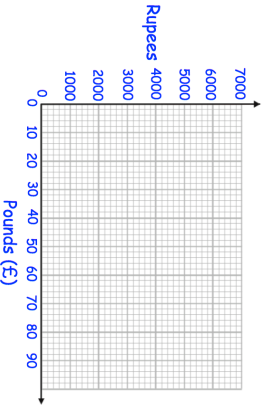

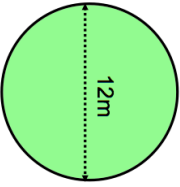


<b>20th June</b>												
Find the value of $2x + 3$ When $x = 10$	Find the value of $10 - 2x$ When $x = 4$	Corbettmaths										
Simplify $m + m + m + m + m$	Simplify $6y + 10 + 2y - 8$											
	Find the circumference of the circle											
												
	The exchange rate to change pounds into Indian rupees is $\text{£}1 = 90$ Rupees											
	Complete the table below.											
	<table border="1"> <tr> <td>Pounds</td> <td>0</td> <td>1</td> <td>10</td> <td>50</td> </tr> <tr> <td>Rupees</td> <td>0</td> <td>90</td> <td></td> <td></td> </tr> </table>	Pounds	0	1	10	50	Rupees	0	90			
Pounds	0	1	10	50								
Rupees	0	90										
	Draw a conversion graph for converting between pounds and rupees.											
												

<b>20th June</b>												
Find the value of $2x + 3$ When $x = 10$	Find the value of $10 - 2x$ When $x = 4$	Corbettmaths										
Simplify $m + m + m + m + m$	Simplify $6y + 10 + 2y - 8$											
	Find the circumference of the circle											
												
	The exchange rate to change pounds into Indian rupees is $\text{£}1 = 90$ Rupees											
	Complete the table below.											
	<table border="1"> <tr> <td>Pounds</td> <td>0</td> <td>1</td> <td>10</td> <td>50</td> </tr> <tr> <td>Rupees</td> <td>0</td> <td>90</td> <td></td> <td></td> </tr> </table>	Pounds	0	1	10	50	Rupees	0	90			
Pounds	0	1	10	50								
Rupees	0	90										
	Draw a conversion graph for converting between pounds and rupees.											
