
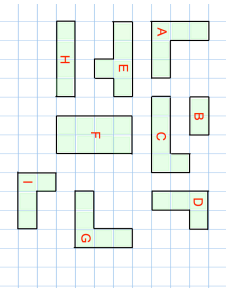
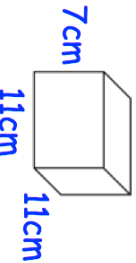

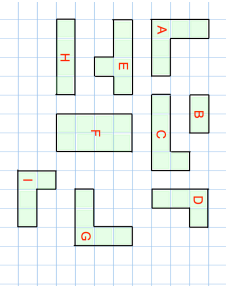


28th June		Corbettmaths 
<p>Last year Melissa was paid £2200 per month. Last year Natalie was paid £3200 per month.</p> <p>Melissa's salary is increased by $\frac{3}{5}$. Natalie's salary is increased by $\frac{1}{6}$.</p> <p>Who is paid more each month this year?</p>		
$\frac{3}{8} + \frac{2}{5}$	$\frac{7}{10} \div \frac{5}{6}$	
	<p>Find a shape that is congruent to A.</p> <p>Find a shape that is mathematically similar to B</p>	
<p>A jar of coffee used to contain 540g.</p> <p>New packets contain one-fifth less.</p> <p>Work out how much the new packet contains.</p>		
<p>Work out the surface area of this cuboid</p> 		

28th June		Corbettmaths 
<p>Last year Melissa was paid £2200 per month. Last year Natalie was paid £3200 per month.</p> <p>Melissa's salary is increased by $\frac{3}{5}$. Natalie's salary is increased by $\frac{1}{6}$.</p> <p>Who is paid more each month this year?</p>		
$\frac{3}{8} + \frac{2}{5}$	$\frac{7}{10} \div \frac{5}{6}$	
	<p>Find a shape that is congruent to A.</p> <p>Find a shape that is mathematically similar to B</p>	
<p>A jar of coffee used to contain 540g.</p> <p>New packets contain one-fifth less.</p> <p>Work out how much the new packet contains.</p>		
<p>Work out the surface area of this cuboid</p> 