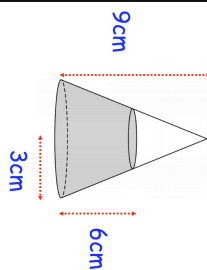
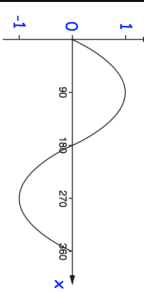
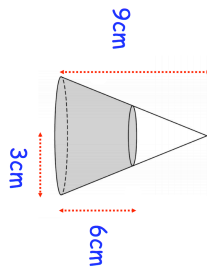
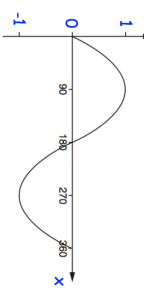


1st June		Corbettmaths												
	Find the volume of liquid in the container													
<p>The table shows the waiting times of patients at a doctors surgery.</p> <table border="1" data-bbox="893 134 1085 403"> <thead> <tr> <th>Time, t (minutes)</th> <th>Frequency</th> </tr> </thead> <tbody> <tr> <td>$0 < t \leq 10$</td> <td>24</td> </tr> <tr> <td>$10 < t \leq 20$</td> <td>31</td> </tr> <tr> <td>$20 < t \leq 30$</td> <td>50</td> </tr> <tr> <td>$30 < t \leq 40$</td> <td>35</td> </tr> <tr> <td>$40 < t \leq 50$</td> <td>60</td> </tr> </tbody> </table>	Time, t (minutes)	Frequency	$0 < t \leq 10$	24	$10 < t \leq 20$	31	$20 < t \leq 30$	50	$30 < t \leq 40$	35	$40 < t \leq 50$	60	Find an estimate of the median wait time.	
Time, t (minutes)	Frequency													
$0 < t \leq 10$	24													
$10 < t \leq 20$	31													
$20 < t \leq 30$	50													
$30 < t \leq 40$	35													
$40 < t \leq 50$	60													
<p>Here is the graph of $y = \sin(x)$ for $0 \leq x \leq 360$</p> 	<p>One solution of $\sin x = -0.5$ is $x = 330^\circ$</p> <p>Find another solution of $\sin x = -0.5$</p>	<p>Two patients are picked at random. Find the probability that both patients waited more than 30 minutes.</p>												
Solve the equations														
$2x + y = 11$ $2x^2 - y^2 = 23$														

1st June		Corbettmaths												
	Find the volume of liquid in the container													
<p>The table shows the waiting times of patients at a doctors surgery.</p> <table border="1" data-bbox="893 1232 1085 1500"> <thead> <tr> <th>Time, t (minutes)</th> <th>Frequency</th> </tr> </thead> <tbody> <tr> <td>$0 < t \leq 10$</td> <td>24</td> </tr> <tr> <td>$10 < t \leq 20$</td> <td>31</td> </tr> <tr> <td>$20 < t \leq 30$</td> <td>50</td> </tr> <tr> <td>$30 < t \leq 40$</td> <td>35</td> </tr> <tr> <td>$40 < t \leq 50$</td> <td>60</td> </tr> </tbody> </table>	Time, t (minutes)	Frequency	$0 < t \leq 10$	24	$10 < t \leq 20$	31	$20 < t \leq 30$	50	$30 < t \leq 40$	35	$40 < t \leq 50$	60	Find an estimate of the median wait time.	
Time, t (minutes)	Frequency													
$0 < t \leq 10$	24													
$10 < t \leq 20$	31													
$20 < t \leq 30$	50													
$30 < t \leq 40$	35													
$40 < t \leq 50$	60													
<p>Here is the graph of $y = \sin(x)$ for $0 \leq x \leq 360$</p> 	<p>One solution of $\sin x = -0.5$ is $x = 330^\circ$</p> <p>Find another solution of $\sin x = -0.5$</p>	<p>Two patients are picked at random. Find the probability that both patients waited more than 30 minutes.</p>												
Solve the equations														
$2x + y = 11$ $2x^2 - y^2 = 23$														