
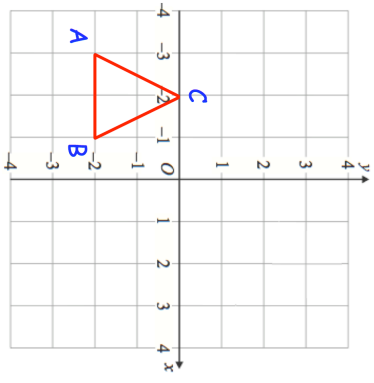

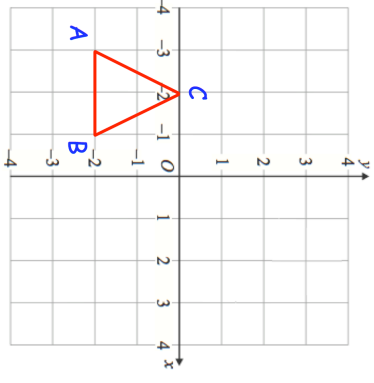


<b>22nd June</b>  Corbettmaths	
Simplify $\frac{x+3}{x^3} \times \frac{x^7}{x+6} \div \frac{x^2}{5x+30}$	
A and B are similar cuboids surface area of A: surface area of B = 9 : 25 Work out volume of A : volume of B	
	Describe a single transformation where point B is invariant and points A and C are not invariant.  Calculate the perimeter of triangle ABC
How many odd numbers less than 50000 can be created using the digits  1 2 5 7 8 9  using each digit once?	

<b>22nd June</b>  Corbettmaths	
Simplify $\frac{x+3}{x^3} \times \frac{x^7}{x+6} \div \frac{x^2}{5x+30}$	
A and B are similar cuboids surface area of A: surface area of B = 9 : 25 Work out volume of A : volume of B	
	Describe a single transformation where point B is invariant and points A and C are not invariant.  Calculate the perimeter of triangle ABC
How many odd numbers less than 50000 can be created using the digits  1 2 5 7 8 9  using each digit once?	