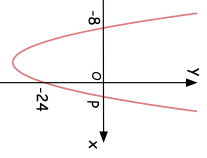
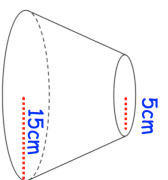
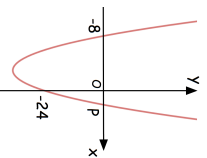
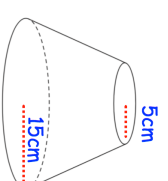


23rd June		Corbettmaths
<p>Below is a sketch of the graph $y = x^2 + bx + c$</p> <p>The curve passes through the points $(-8, 0)$, $(0, -24)$ and $(P, 0)$</p>  <p>Work out the coordinates of the turning point of the graph.</p>		
<p>A frustum is made from cutting a small cone from the top of a larger cone. The larger cone was 21cm tall.</p>  <p>Calculate the volume of the frustum</p>		
<p>Find the equation of the line perpendicular to $x + 4y - 6 = 0$ and passing through $(1, 8)$</p>		

23rd June		Corbettmaths
<p>Below is a sketch of the graph $y = x^2 + bx + c$</p> <p>The curve passes through the points $(-8, 0)$, $(0, -24)$ and $(P, 0)$</p>  <p>Work out the coordinates of the turning point of the graph.</p>		
<p>A frustum is made from cutting a small cone from the top of a larger cone. The larger cone was 21cm tall.</p>  <p>Calculate the volume of the frustum</p>		
<p>Find the equation of the line perpendicular to $x + 4y - 6 = 0$ and passing through $(1, 8)$</p>		