
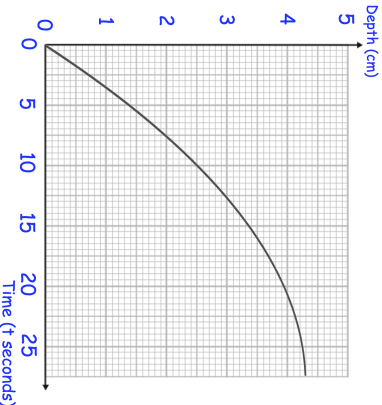

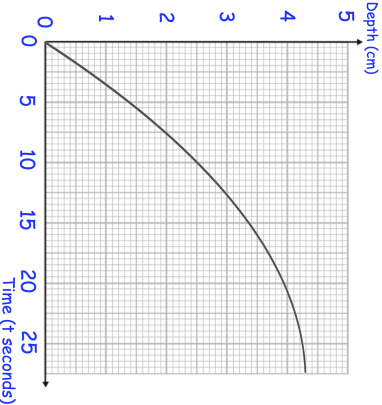


4th June	Corbettmaths 
Which of these values cannot be the sine of an angle?	0 -0.9 $\frac{2}{3}$ 1.2
Calculate an estimate for the gradient of the graph when $t = 5$ seconds.	
$h(x) = 2x + 1$ Find the value of a such that $h(a) = h^{-1}(a)$	
Find the set of values of x that satisfy both	
$2x - 6 > 6 - 6x$ and $x^2 - 6x + 2 < 42$	

4th June	Corbettmaths 
Which of these values cannot be the sine of an angle?	0 -0.9 $\frac{2}{3}$ 1.2
Calculate an estimate for the gradient of the graph when $t = 5$ seconds.	
$h(x) = 2x + 1$ Find the value of a such that $h(a) = h^{-1}(a)$	
Find the set of values of x that satisfy both	
$2x - 6 > 6 - 6x$ and $x^2 - 6x + 2 < 42$	