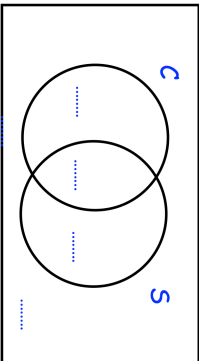
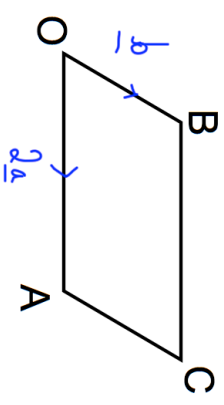
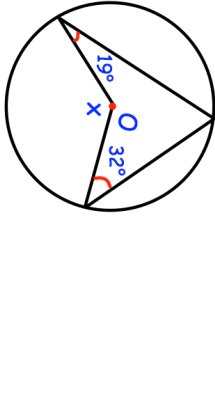


Name: \_\_\_\_\_

5-a-day

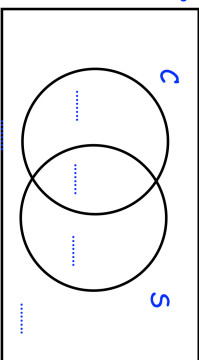
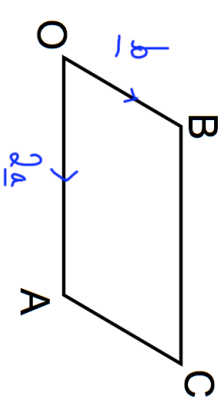
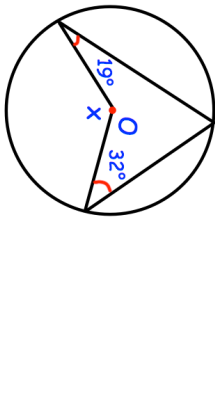
Higher

<p><b>16th June</b></p> <p><math>\xi = 100</math> farmers  <math>C =</math> farmers that keep cattle  <math>S =</math> farmers that keep sheep</p> <p>76 farmers keep only cattle or only sheep.</p> <p><math>\frac{19}{2}</math> of these 76 farmers only keep sheep</p> <p>The number of farmers that keep cattle is three times the number that keep sheep.</p> <p>Complete the Venn Diagram</p>	<p style="text-align: right;">Corbettmaths</p> 
<p>Make a the subject</p> <p><math>8a + 3c = ab + 13c</math></p>	
	<p><math>\vec{OC}</math></p> <p><math>\vec{AB}</math></p>
	<p>Find x</p>

Name: \_\_\_\_\_

5-a-day

Higher

<p><b>16th June</b></p> <p><math>\xi = 100</math> farmers  <math>C =</math> farmers that keep cattle  <math>S =</math> farmers that keep sheep</p> <p>76 farmers keep only cattle or only sheep.</p> <p><math>\frac{19}{2}</math> of these 76 farmers only keep sheep</p> <p>The number of farmers that keep cattle is three times the number that keep sheep.</p> <p>Complete the Venn Diagram</p>	<p style="text-align: right;">Corbettmaths</p> 
<p>Make a the subject</p> <p><math>8a + 3c = ab + 13c</math></p>	
	<p><math>\vec{OC}</math></p> <p><math>\vec{AB}</math></p>
	<p>Find x</p>