
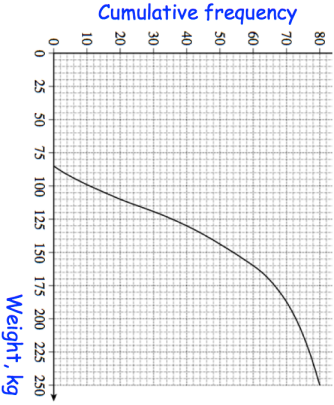

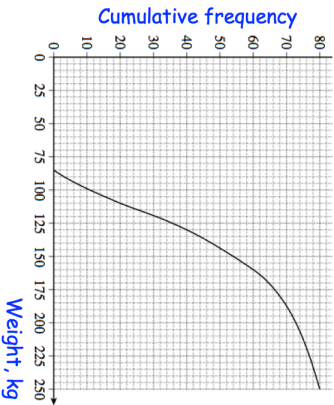


<b>29th June</b> Work out $0.5$ $16$	 Corbettmaths
The heights of 6 plants are listed below. Each height is given to one decimal place. 4.5cm      7.2cm      8.1cm 9.6cm      9.1cm      3.1cm	Work out the largest possible range.
$w$ is directly proportional to $a^2$ When $w = 50$ , $a = 10$ Find $w$ when $a = 5$ .	
 <p>The cumulative frequency diagram shows the weight of 80 animals</p>	What is the median?  What is the interquartile range?

<b>29th June</b> Work out $0.5$ $16$	 Corbettmaths
The heights of 6 plants are listed below. Each height is given to one decimal place. 4.5cm      7.2cm      8.1cm 9.6cm      9.1cm      3.1cm	Work out the largest possible range.
$w$ is directly proportional to $a^2$ When $w = 50$ , $a = 10$ Find $w$ when $a = 5$ .	
 <p>The cumulative frequency diagram shows the weight of 80 animals</p>	What is the median?  What is the interquartile range?