
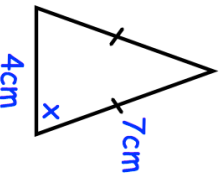
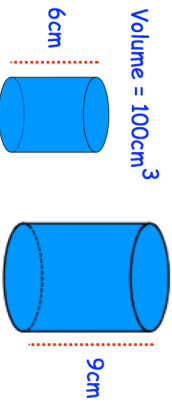

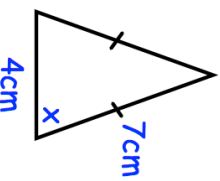
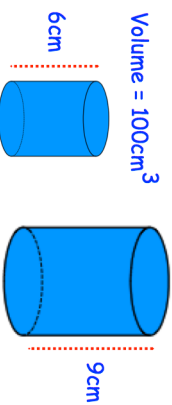


9th June	Corbettmaths 
Find the least and greatest total length of 6 sausages, each measuring 8cm to the nearest centimetre.	<p style="text-align: right;">Least lengthcm</p> <p style="text-align: right;">Greatest lengthcm</p>
Write as a single power of 5. $\frac{5^3 \times 5^{11}}{5^2}$	
	Find x
<p>Volume = 100cm^3</p> 	Find the volume of the larger cylinder.
Expand and simplify $(x - 5)(x - 4)^2$	

9th June	Corbettmaths 
Find the least and greatest total length of 6 sausages, each measuring 8cm to the nearest centimetre.	<p style="text-align: right;">Least lengthcm</p> <p style="text-align: right;">Greatest lengthcm</p>
Write as a single power of 5. $\frac{5^3 \times 5^{11}}{5^2}$	
	Find x
<p>Volume = 100cm^3</p> 	Find the volume of the larger cylinder.
Expand and simplify $(x - 5)(x - 4)^2$	