
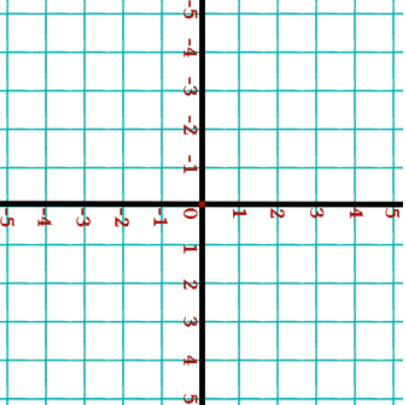

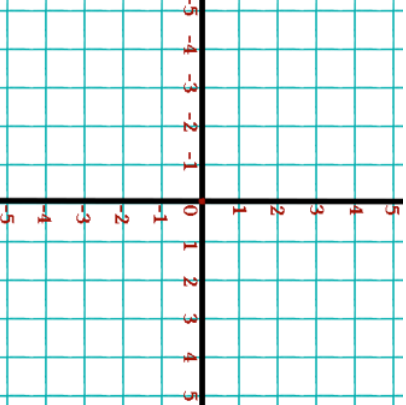


1st June		Corbettmaths 								
Decrease £15 by £3	Increase £192 by £9									
At 9pm the temperature in Bristol was 2°C At 3am the temperature was -6°C By how many degrees did the temperature fall?										
<table border="1"> <thead> <tr> <th>Decimal</th> <th>Percentage</th> </tr> </thead> <tbody> <tr> <td>0.15</td> <td>15%</td> </tr> <tr> <td>0.5</td> <td>70%</td> </tr> <tr> <td>0.03</td> <td></td> </tr> </tbody> </table>	Decimal	Percentage	0.15	15%	0.5	70%	0.03		Complete this table.	
Decimal	Percentage									
0.15	15%									
0.5	70%									
0.03										
	Plot these coordinates A(-2, -1) B(4, -1) C(-1, 3) D(5, 3)	Name the shape ABCD								

1st June		Corbettmaths 								
Decrease £15 by £3	Increase £192 by £9									
At 9pm the temperature in Bristol was 2°C At 3am the temperature was -6°C By how many degrees did the temperature fall?										
<table border="1"> <thead> <tr> <th>Decimal</th> <th>Percentage</th> </tr> </thead> <tbody> <tr> <td>0.15</td> <td>15%</td> </tr> <tr> <td>0.5</td> <td>70%</td> </tr> <tr> <td>0.03</td> <td></td> </tr> </tbody> </table>	Decimal	Percentage	0.15	15%	0.5	70%	0.03		Complete this table.	
Decimal	Percentage									
0.15	15%									
0.5	70%									
0.03										
	Plot these coordinates A(-2, -1) B(4, -1) C(-1, 3) D(5, 3)	Name the shape ABCD								