

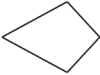
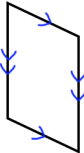
Name: _____

5-a-day

Numeracy



Corbettmaths

10th June A coffee costs £1.35 Paul buys four coffees. What is the total cost of the four coffees?	He pays with a £10 note. How much change does he get?
 Name this shape	 Name this shape
Work out $(9 + 2) \times (7 + 3)$	Work out $30 \times 10 - 4 \div 2$
Work out $\frac{6}{11}$ of 55	
A crate can hold 12 cans of lemonade. Thomas has 200 cans of lemonade. How many crates can be filled?	

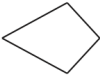
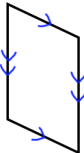
Name: _____

5-a-day

Numeracy



Corbettmaths

10th June A coffee costs £1.35 Paul buys four coffees. What is the total cost of the four coffees?	He pays with a £10 note. How much change does he get?
 Name this shape	 Name this shape
Work out $(9 + 2) \times (7 + 3)$	Work out $30 \times 10 - 4 \div 2$
Work out $\frac{6}{11}$ of 55	
A crate can hold 12 cans of lemonade. Thomas has 200 cans of lemonade. How many crates can be filled?	