


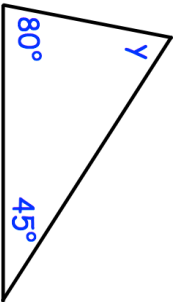
Name: \_\_\_\_\_

5-a-day

Numeracy



Corbettmaths

<b>30th June</b>	
A primary school has 212 students. 50% of the students are boys. How many of the students are boys?	
A pie is cut into 6 equal slices. Two slices are eaten. What fraction of the pie is left?	
	Find the size of $y$
James is running in a 5 kilometres ran. He has run 80 metres. How much further, in metres, must he run?	
James says that all numbers have an even number of factors. Is he correct?	


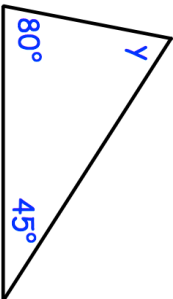
Name: \_\_\_\_\_

5-a-day

Numeracy



Corbettmaths

<b>30th June</b>	
A primary school has 212 students. 50% of the students are boys. How many of the students are boys?	
A pie is cut into 6 equal slices. Two slices are eaten. What fraction of the pie is left?	
	Find the size of $y$
James is running in a 5 kilometres ran. He has run 80 metres. How much further, in metres, must he run?	
James says that all numbers have an even number of factors. Is he correct?	